

NOME: _____






DATA: _____

TURMA: _____

CONTANDO COM OS SAPINHOS

ORGANIZE OS SAPINHOS CONSIDERANDO A QUANTIDADE DE CADA BLOCO

1	
2	
3	
4	
5	



ARRASTE OS SAPINHOS PARA O LOCAL CORRETO.



Analice Gomes