



# ATIVIDADES




1


Ajude o Mario a encontrar o quadrado que corresponde a área de  $2500 \text{ m}^2$



25 m



20 m



50 m

50 m



35 m

35 m




2

Ajude o Luigi a calcular a área em  $\text{m}^2$  e perímetro em m de cada polígono:

Área

Perímetro



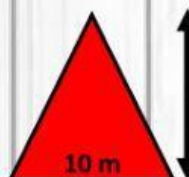
30 m

30 m



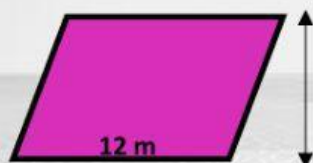

30 m

40 m



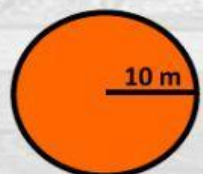

10 m

15 m



12 m

6 m



10 m



Grasi

Gino