


GOVERNMENT PRIMARY SCHOOL
THAKKALORE
AREA AND PERIMETER WORKSHEET

write the area and perimeter of each figure

Area = length x breadth

Perimeter
= 2 x (length + breadth)
or
= length + breadth + length + breadth




A= _____ sq.cm

P= _____ cm



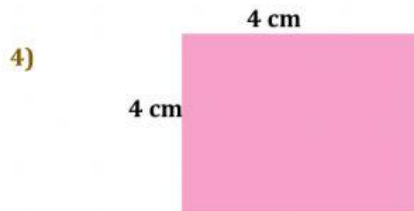
A= _____ sq.cm

P= _____ cm



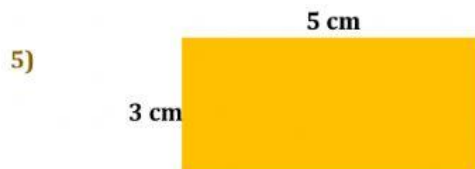
A= _____ sq.cm

P= _____ cm



A= _____ sq.cm

P= _____ cm



A= _____ sq.cm

P= _____ cm