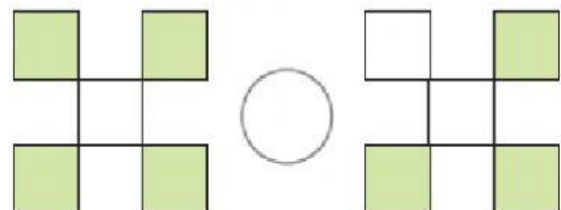
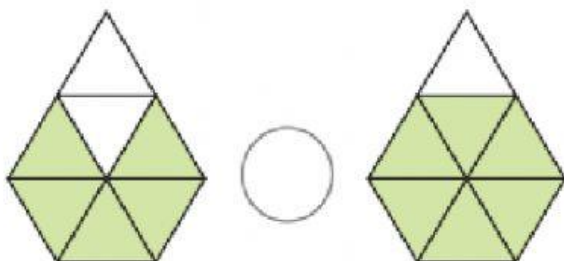
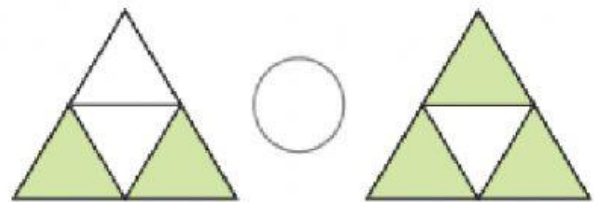
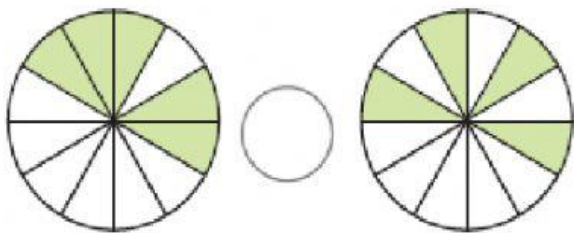
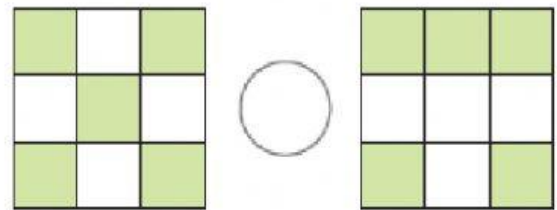
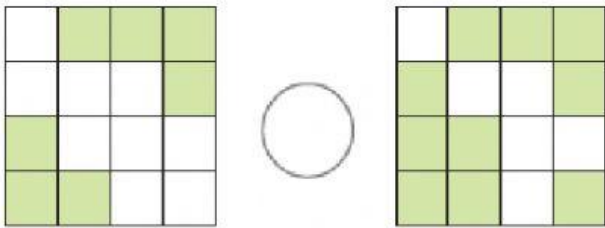
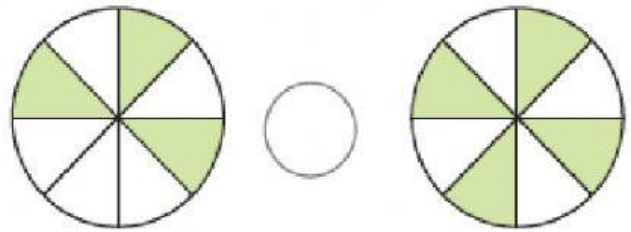
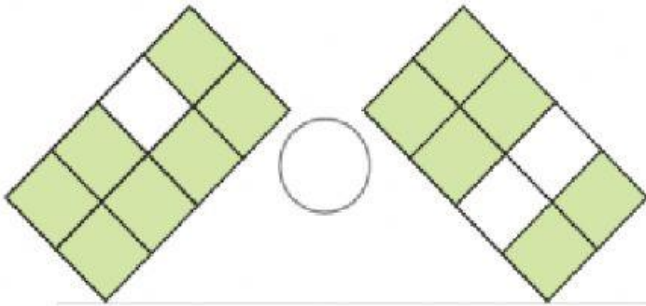
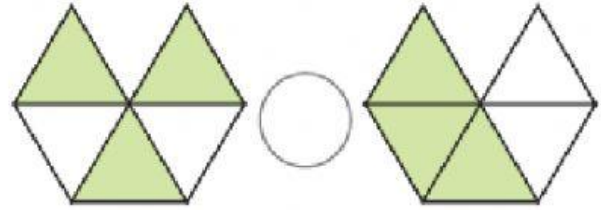
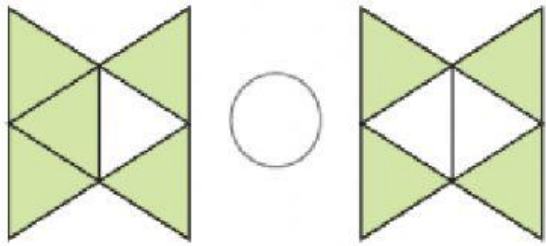


Fletë pune
Krahasimi i thyesave

Emri i nxënësit: _____

1. Krahaso pjesët e hijezuara të figurave duke përdorur $<=>$.



Fletë pune
Krahasimi i thyesave

Emri i nxënësit: _____

1. Krahaso thyesat e dhëna duke përdorur $<$, $=$, $>$.



$$\frac{2}{4} \bigcirc \frac{1}{4}$$

$$\frac{3}{4} \bigcirc \frac{1}{4}$$

$$\frac{2}{5} \bigcirc \frac{1}{5}$$

$$\frac{1}{3} \bigcirc \frac{1}{5}$$

$$\frac{2}{6} \bigcirc \frac{5}{6}$$

$$\frac{1}{8} \bigcirc \frac{2}{8}$$

$$\frac{1}{2} \bigcirc \frac{1}{3}$$

$$\frac{1}{6} \bigcirc \frac{1}{5}$$

$$\frac{3}{5} \bigcirc \frac{3}{10}$$

$$\frac{2}{7} \bigcirc \frac{2}{6}$$

$$\frac{1}{3} \bigcirc \frac{1}{8}$$

$$\frac{2}{5} \bigcirc \frac{2}{6}$$

$$\frac{1}{5} \bigcirc \frac{1}{4}$$

$$\frac{3}{7} \bigcirc \frac{3}{5}$$

$$\frac{1}{8} \bigcirc \frac{1}{3}$$

$$\frac{7}{9} \bigcirc \frac{5}{9}$$

$$\frac{2}{3} \bigcirc \frac{2}{2}$$

$$\frac{2}{3} \bigcirc \frac{0}{3}$$

$$\frac{1}{5} \bigcirc \frac{1}{2}$$

$$\frac{2}{6} \bigcirc \frac{2}{3}$$

$$\frac{1}{8} \bigcirc \frac{1}{6}$$

$$\frac{2}{5} \bigcirc \frac{2}{3}$$

$$\frac{2}{4} \bigcirc \frac{2}{8}$$