

1. Fill up the missing numbers by drag and drop in the corresponding place

1	2		4	
6		8		
11		13		
16	17		19	

14	12	3	9	18
20	15	5	10	7




2. Place the numbers to show counting by 2's



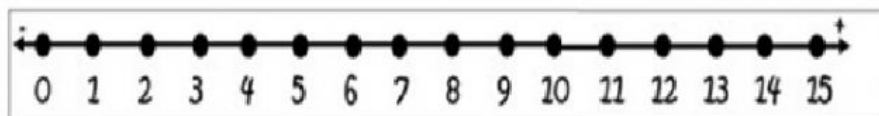
--	--	--	--	--

8	10	2	6	4
---	----	---	---	---

2. Look at each group. Count and select the correct answer.

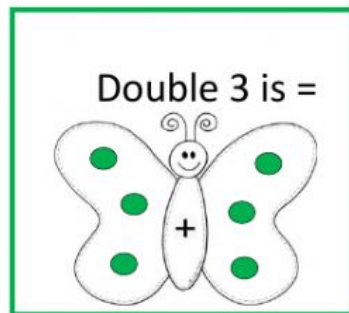
								
12	11	10	10	6	9	13	14	15

3. Write the number that is "one less" and "one more" than the number in the middle.

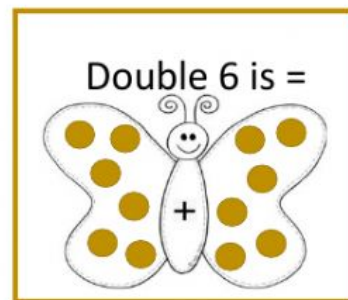


One less (-1)		One more (+1)
	3	
	6	
	14	

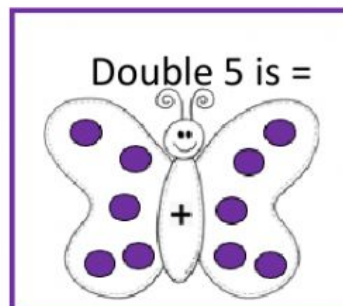
4. Listen and complete the equation of doubles.



$$\underline{3} + \underline{\quad} = \underline{\quad}$$



$$\underline{6} + \underline{\quad} = \underline{\quad}$$



$$\underline{5} + \underline{\quad} = \underline{\quad}$$

CONGRATULATIONS!



**GOOD
JOB!**