













Name: _____ Class: _____ Date: _____

		WORKING OUT
1)	There are 15  . There are 2  . How many in all?	$+ \underline{\hspace{2cm}}$
2)	There are 23  . 3 more  come. How many in all?	$+ \underline{\hspace{2cm}}$
3)	I have 26  . I buy 4  more. How many in all?	$+ \underline{\hspace{2cm}}$
4)	Jack has 22  . Jill has 4  . How many in all?	$+ \underline{\hspace{2cm}}$
5)	There are 16  . 2  more come. How many in all?	$+ \underline{\hspace{2cm}}$
6)	I have 34  . I buy 5  more. How many in all?	$+ \underline{\hspace{2cm}}$