



Name : .....

Kelas : 3.....

I. Choose the correct answer by writing (x) a, b, c or d!

1. The value of these money is ....



- a. Rp7.000,00
  - b. Rp8.000,00
  - c. Rp9.000,00
  - d. Rp11.000,00
2. The symmetrical letter is ....

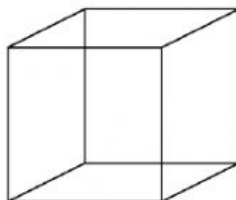
- a. F
- b. H
- c. J
- d. G

- 3.



Triangle has ...corners.

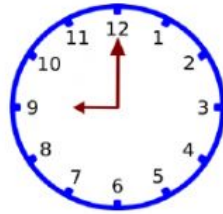
- a. 2
  - b. 3
  - c. 4
  - d. 5
4. Cube has ... faces.



- a. 12
- b. 10
- c. 8
- d. 6



5. The clock below shows time ....



- a. 8.00
- b. 9.00
- c. 10.00
- d. 12.00

6. Boy went to Jakarta for 2 weeks. So, Boy went to Jakarta for ... days.

- a. 21
- b. 14
- c. 7
- d. 3

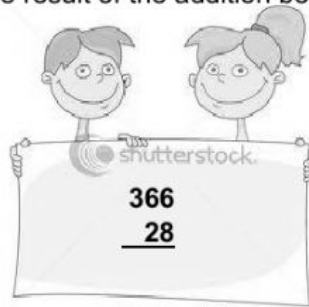
7. The month before May is ....

- a. April
- b. June
- c. July
- d. September

8. There are 214 boys and 123 girls in a school. Total student in that school are ....

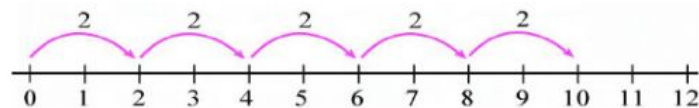
- a. 337
- b. 373
- c. 383
- d. 387

9. The result of the addition below is ....



- a. 374
- b. 384
- c. 394
- d. 484

10. The number sentence of the multiplication on a number line is ...



- a.  $5 \times 3 = 15$
- b.  $4 \times 4 = 12$
- c.  $4 \times 3 = 12$
- d.  $5 \times 2 = 10$



**II. Fill in the blank with the correct answer!**

11. Look at the price of these goods, and then solve the problem!

			
Rp2000,00	Rp6.000,00	Rp1.500,00	Rp4.000,00


- a. Indah wants to buy 2 erasers and a book. How much does she pay?

Answer :

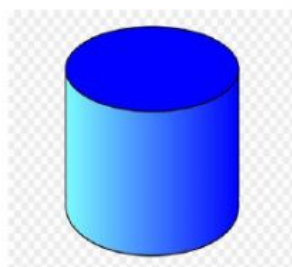
- b. Rida has Rp10.000,00. What kind of goods she can buy?

Answer :

12. Write the time below!



13. Identify the attributes of 3 D Shape!



**What am I ?**

My name is .....

Faces : .....

Edges : .....

Vertices : .....

- 14.a. Fill the missing number with multiples of 5!




20	.....	30	.....	.....	45	.....	55
----	-------	----	-------	-------	----	-------	----

- b. Fill the missing number with multiples of 10!

....	....	40	.....	.....	70	....	90
------	------	----	-------	-------	----	------	----



15. Fill the table below!

Arrays	Multiplication
	$\dots \times \dots = \dots$
	$\dots \times \dots = \dots$
	$\dots \times \dots = \dots$