





Divide los recuadros como se indica y haz las operaciones.

Divide en 3 partes



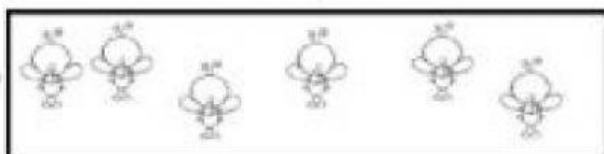
$$9 \div 3 = \underline{\quad 3 \quad}$$

Divide en 4 partes



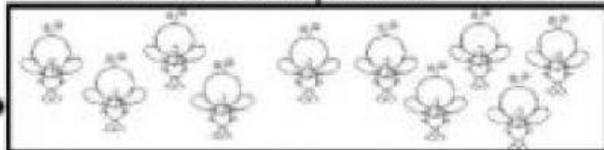
$$12 \div 4 = \underline{\hspace{2cm}}$$

Divide en 2 partes



$$6 \div 2 = \underline{\hspace{2cm}}$$

Divide en 5 partes



$$10 \div 5 = \underline{\hspace{2cm}}$$

Completa como se indica en el ejemplo:

$$4 \times \boxed{2} = \underline{8}$$

$$8 : 4 = \boxed{}$$

$$5 \times \boxed{} = \underline{25}$$

$$25 : 5 = \boxed{}$$

$$9 \times \boxed{} = \underline{18}$$

$$18 : 9 = \boxed{}$$

$$8 \times \boxed{} = \underline{64}$$

$$64 : 8 = \boxed{}$$

$$6 \times \boxed{} = \underline{30}$$

$$30 : 6 = \boxed{}$$