
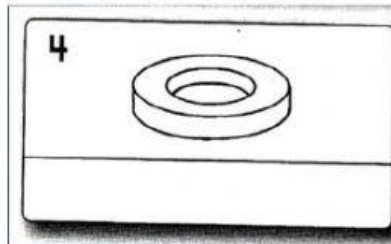
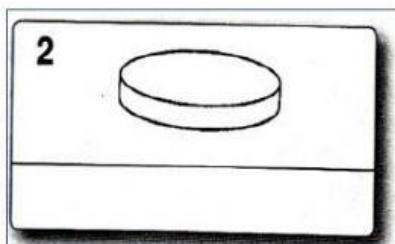

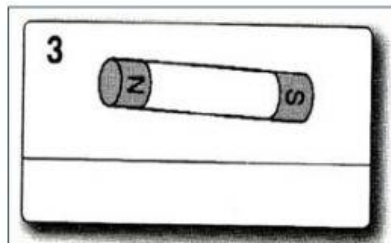



Name the different types of magnets below

Cylindrical magnet	Button magnet	U-shape magnet
Bar magnet	Horseshoe magnet	Ring magnet



Group the following objects correctly

Paper	Thumbtack	Iron key	Plastic cup
Sharpener	Marble	Metal ruler	Steel spoon

Attracted by magnets

Not attracted by magnets