
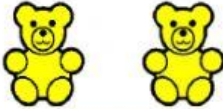



Word Problems

- 1) Paul has 3 red bears and 2 yellow bears. How many bears does he have?



$$\square + \square = \square$$

- 2) Mary has 1 cupcake and Tim has 3 cupcakes. How many cupcakes do they have altogether?

$$\square + \square = \square$$

- 3) I have 2 pencils I buy 1 more. How many do I have in all.

$$\square + \square = \square$$