

## THREE VITAL FUNCTIONS

1. Match the names of the three vital functions.

REPRODUCTION

NUTRITION

INTERACTION

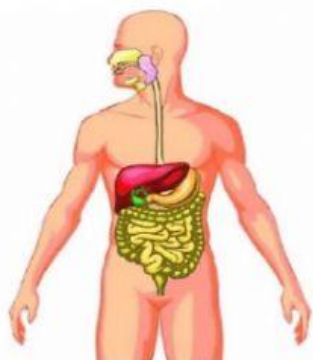


2. Read and write **interaction**, **nutrition** or **reproduction**.

- ★ I play football with my friends. \_\_\_\_\_
- ★ I eat pizza with cheese. \_\_\_\_\_
- ★ I have a baby brother. \_\_\_\_\_
- ★ My brother has toast with jam for breakfast. \_\_\_\_\_
- ★ My mother is pregnant (embarazada). \_\_\_\_\_
- ★ I listen to my teacher in class. \_\_\_\_\_

## NUTRITION FUNCTION

1. Choose the correct option.



## 2. Match.

Digestive system	It transports nutrients and oxygen to all the body.
Respiratory system	It eliminates urine.
Circulatory system	It absorbs nutrients from the food we eat.
Excretory system	It absorbs oxygen from the air.

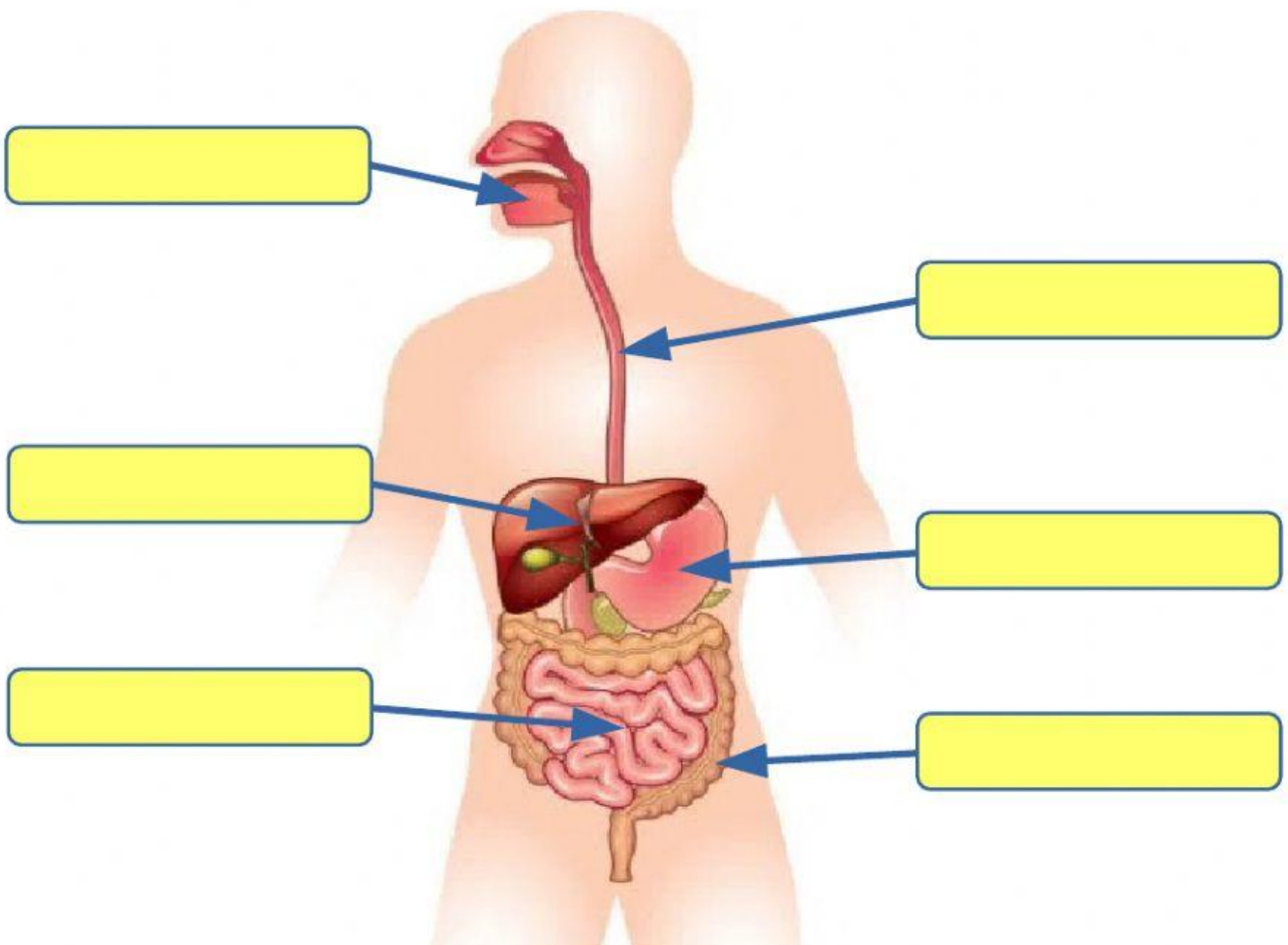
## 3. What is nutrition? Order the words to answer.

getting process the Nutrition of is energy.

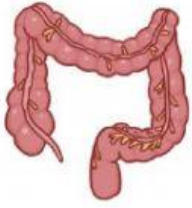
\_\_\_\_\_

## THE DIGESTIVE SYSTEM

### 1. Label the organs of the digestive system. Choose the correct option.



2. Write the names of these organs.



3. Which organ is it? Drag (arrastra).

small intestine

teeth

stomach

esophagus

large intestine

	They chew the food.
	It connects the mouth to the stomach.
	It absorbs water and eliminates faeces.
	It mixes food with special liquids and the digestion starts.
	It is a long tube. It absorbs nutrients.

4. Choose the words related to the **digestive system**.

large intestine

oxygen

urine

eat

stomach

trachea

faeces

pancakes

esophagus

small intestine

nose

mouth

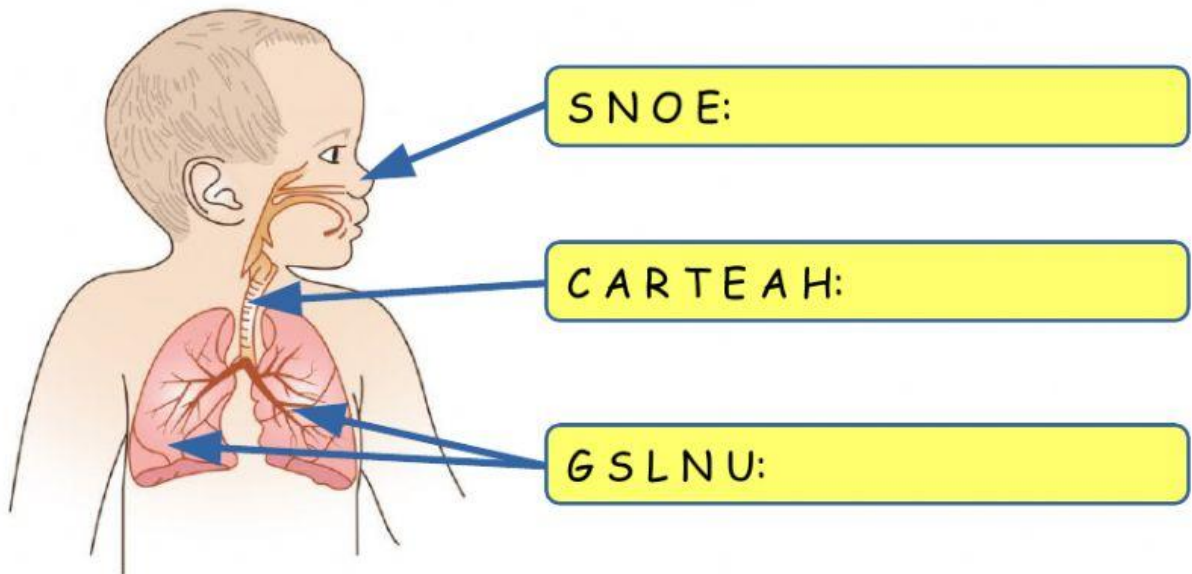
5. Number to order the process of digestion.

- ☐ The food goes down the **esophagus** and enters the stomach.
- ☐ **Finally**, in the **large intestine** water is absorbed. Faeces are eliminated from our body.
- ☐ In the **stomach** the digestion starts.
- ☐ **Next**, the food goes into the **small intestine**. Here nutrients are absorbed.
- ☐ **First**, we chew the food in the **mouth** with our teeth.



# THE RESPIRATORY SYSTEM

1. Order the letters to write the organs of the respiratory system.



2. What is the function of the respiratory system? Tick.

- ☐ The respiratory system eliminates urine.
- ☐ The respiratory system absorbs oxygen from the air.
- ☐ The respiratory system absorbs nutrients from food.

3. Drag to order the sentences.

enters the First, nose. the air

the air The down goes trachea.

absorb lungs oxygen. the Finally,