

English Branch
Cycle 1
Grade 2


Problem solving

Use the box to solve the problem. Then write the addition sentence.

1. Fadi has 8 green balloons and 3 red balloons. He also has 2 oranges. How many balloons does Fadi have in all?

_____ + _____ = _____


_____ balloons



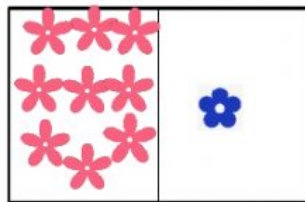
ooo

ooooooo
oo


2. Yasmine has 9 pink flowers. She also has 4 blue flowers. Which picture shows how many flowers Yasmine has?




(A)



(B)



(C)



(D)