

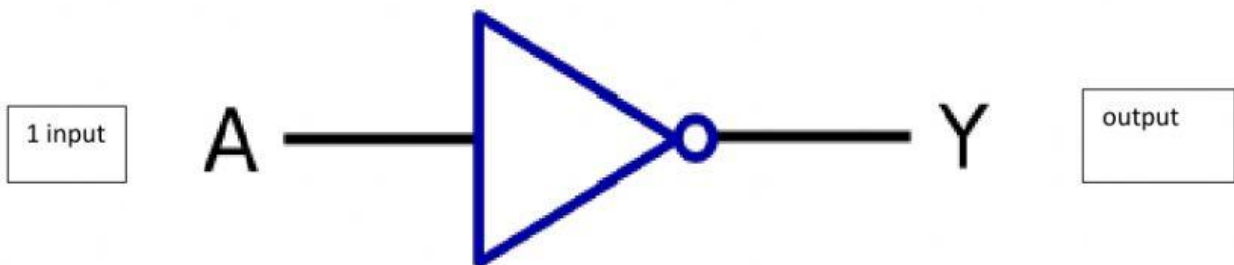


Name: _____

Logic symbols

Task: Label up the shapes by saying which is a **NOT**, **AND**, & an **OR** gate then say under each how they work.



Name: _____

Truth Tables for the gates

Your task is to work out what the out will be, remember that **1= On** and **0=Off**

NOT Gate:

Input	output
1	
0	

AND Gate:

Input 1	Input 2	Output
1	0	
0	1	
1	1	
0	0	

OR Gate:

Input 1	Input 2	Output
0	0	
1	0	
0	1	
1	1	