


1)


There are 6 .

5 more  come.

How many are there now? _____

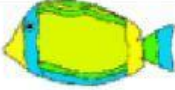
2)


I have 7 .

I am given 5  more.

How many  do I have? _____

3)

Bert has 4 .

Bill has 8 .

How many in all? _____

4)

A cake shop sells 8  on Monday, and 5  on Tuesday.

How many  in total? _____

5)

I buy 7  on Wednesday.

I buy 4  on Friday.

How many  did I buy? _____