

# MULTIPLO KOMUNETAKO TXIKIENA

12	8
12 =	
8 =	
mkt =	

30	9
30 =	
9 =	
mkt =	

18	6
18 =	
6 =	
mkt =	

20	25
20 =	
25 =	
mkt =	

10	15
10 =	
15 =	
mkt =	

21	9
21 =	
9 =	
mkt =	

15	9
15 =	
9 =	
mkt =	

18	12
18 =	
12 =	
mkt =	

8	10
=	
=	
mkt =	










27	6
27 =	
6 =	
mkt =	

33	22
33 =	
22 =	
mkt =	

8	16
8 =	
16 =	
mkt =	



8	28
8 =	
28 =	
mkt =	



Kalkulatu zenbaki bikote bakoitzaren multiplo komunetako txikiena eta eraman emaitza bakoitzaren irudia dagokion lekura.