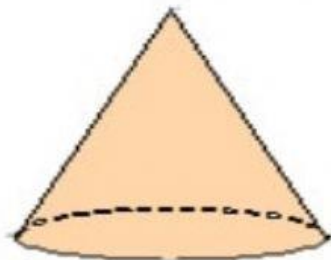


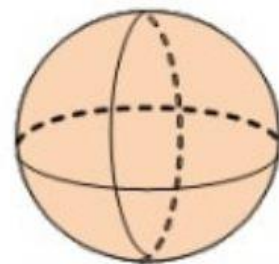
A. Isikan tempat kosong dengan jawapan yang betul.

**Piramid****Kon****Kuboid****Sfera****Silinder****Kubus**

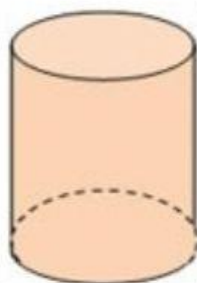
1.



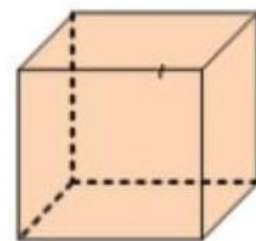
2.



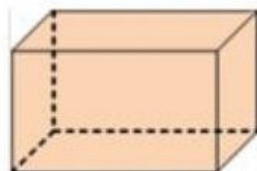
3.



4.



5.



6.

