

# Área del rectángulo

Miss Janet



$$A = b \times h$$

**1.-Hallar el área del rectángulo y luego selecciona la alternativa correcta.**

**A)**



altura = 3 cm

base = 4 cm

**a)**

**b)**

**c)**

**B)**



h = 7 cm

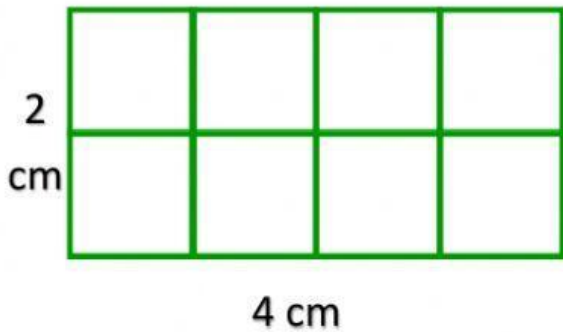
b = 10 cm

**a)**

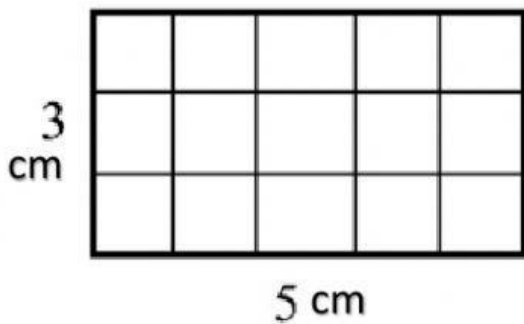
**b)**

**c)**

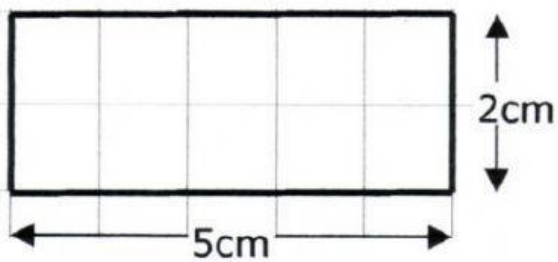
**2.- Relaciona los rectángulos con su área correcta.**



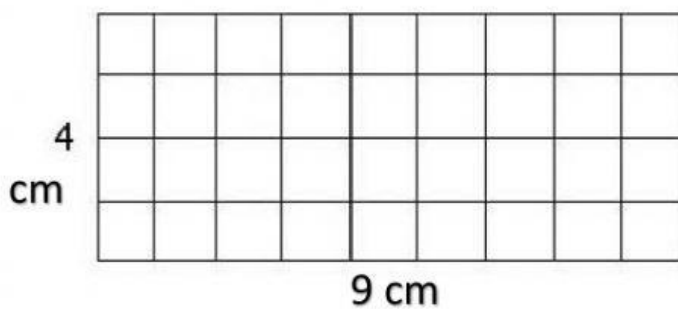
$$A = 15 \text{ cm}^2$$



$$A = 8 \text{ cm}^2$$



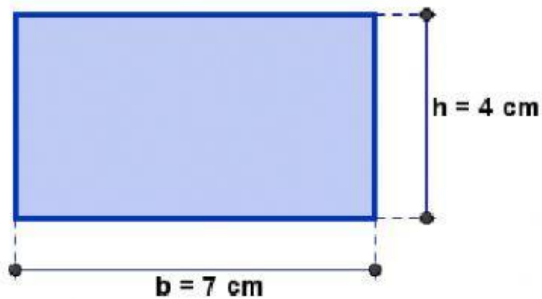
$$A = 36 \text{ cm}^2$$



$$A = 10 \text{ cm}^2$$

**3.- Aplica la fórmula para hallar el área del rectángulo.**

**A)**

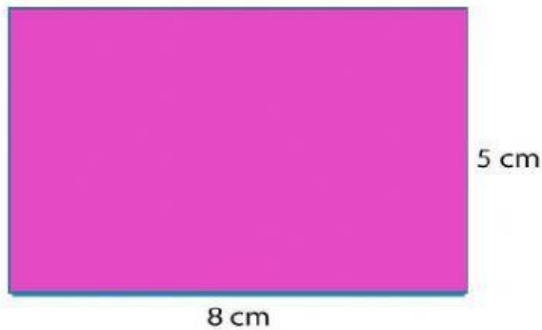


$$A = b \times h$$

$$A = \quad \times$$

$$A = \quad \text{cm}^2$$


**B)**



$$A = \quad \times$$

$$A = \quad \text{cm}^2$$

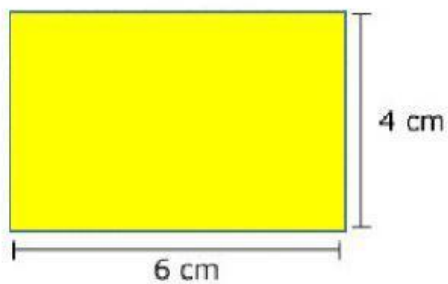
**C)**



$$A = \quad \times$$

$$A = \quad \text{cm}^2$$

**D)**



$$A = \quad \times$$

$$A = \quad \text{cm}^2$$