







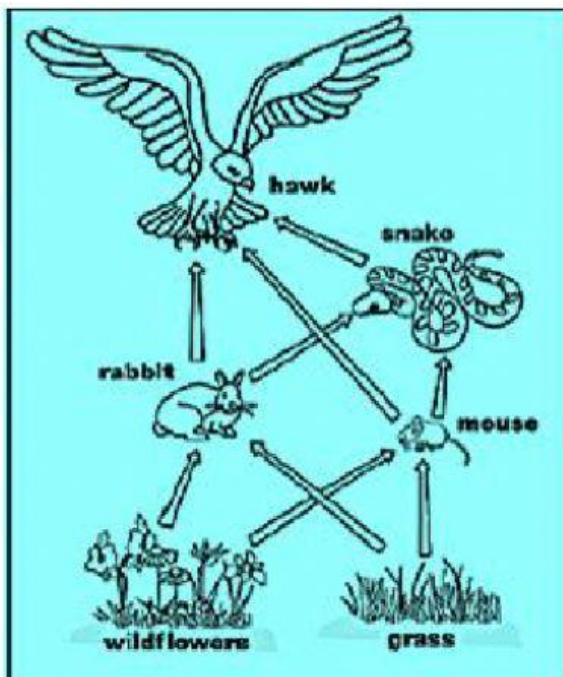
FOOD CHAIN

Complete the food chains. Drag and drop the pictures in the correct order. Write the name of each animal.



FOOD WEB

Look at the food web and answer.



1. Select the living things from the food web that are producers **hawk** **mouse** **grass** **rabbit**

wildflowers **snake**

2. Select the living things from the food web that are consumers **hawk** **wildflowers** **mouse**

snake **grass** **rabbit**

3. Which living things do the snake eat?

4. What is eaten by the rabbit?
