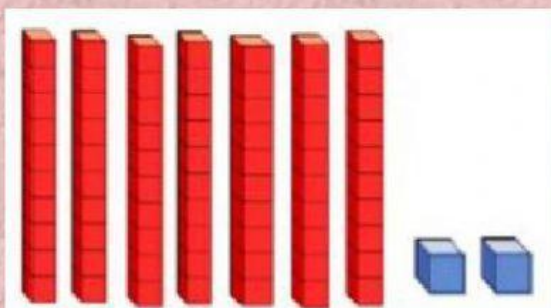

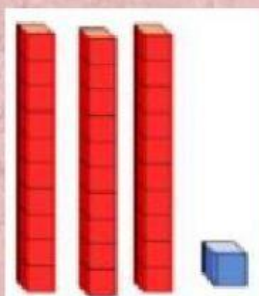
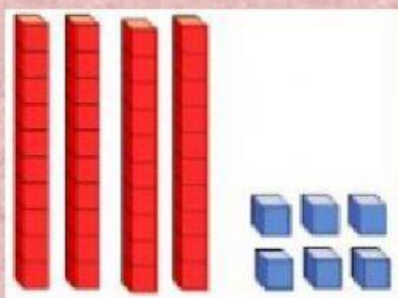
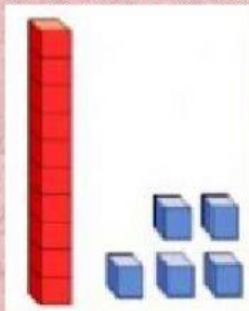
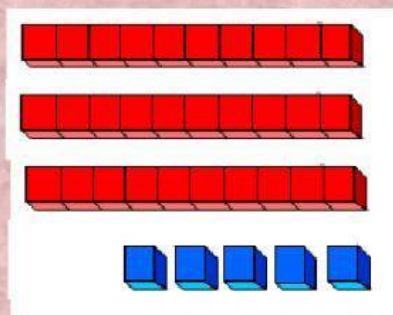


Representación de números

1.- Escribe el número que representan los bloques.

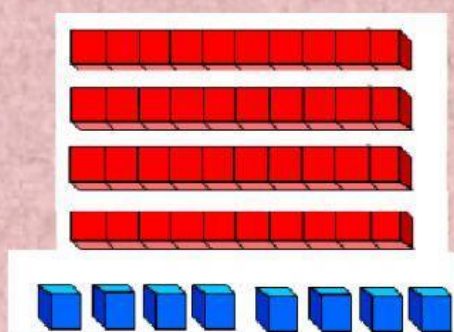


2.- Completa de acuerdo a la cantidad de bloques de cada ejercicio. Sigue el ejemplo.



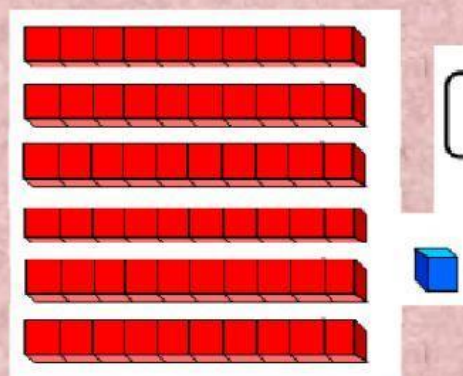
$$\boxed{3} \text{ decenas y } \boxed{5} \text{ unidades}$$

$$\boxed{30} + \boxed{5} = \boxed{35}$$



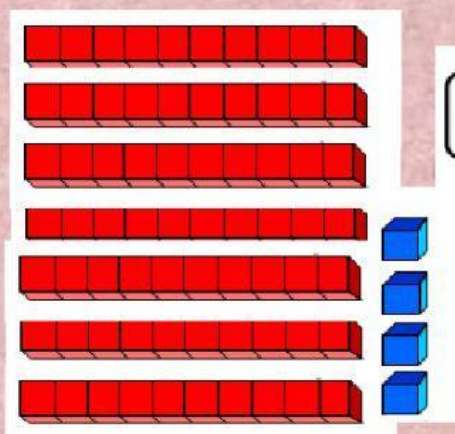
$$\boxed{} \text{ decenas y } \boxed{} \text{ unidades}$$

$$\boxed{} + \boxed{} = \boxed{}$$



$$\boxed{} \text{ decenas y } \boxed{} \text{ unidades}$$

$$\boxed{} + \boxed{} = \boxed{}$$



$$\boxed{} \text{ decenas y } \boxed{} \text{ unidades}$$

$$\boxed{} + \boxed{} = \boxed{}$$