


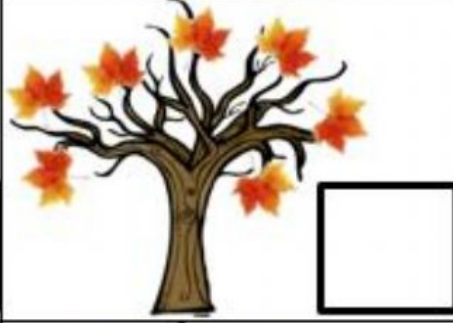

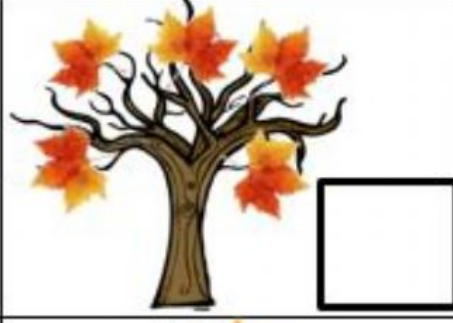






Μέτρησε τα φύλλα σε κάθε δέντρο ,σύρε και βάλε το σωστό αριθμό.

 <input data-bbox="496 465 639 600" type="text"/>	 <input data-bbox="959 465 1102 600" type="text"/>
 <input data-bbox="496 792 639 927" type="text"/>	 <input data-bbox="959 792 1102 927" type="text"/>
 <input data-bbox="496 1120 639 1254" type="text"/>	 <input data-bbox="959 1120 1102 1254" type="text"/>
 <input data-bbox="496 1447 639 1581" type="text"/>	 <input data-bbox="959 1447 1102 1581" type="text"/>
 <input data-bbox="496 1774 639 1908" type="text"/>	 <input data-bbox="959 1774 1102 1908" type="text"/>

3

7

6

2

4

9

10

5

8

1