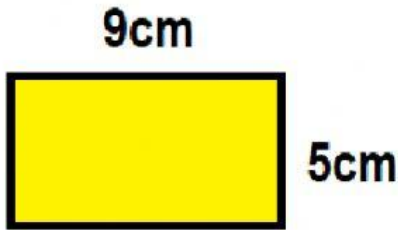




## Area and Perimeter Worksheet

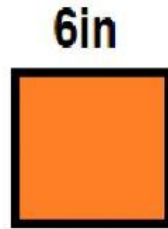


Calculate the area and perimeter of the following figures.



Perimeter \_\_\_\_\_ cm

Area \_\_\_\_\_ cm<sup>2</sup>



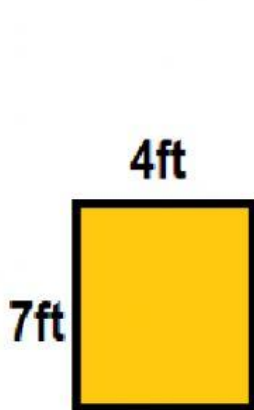
Perimeter \_\_\_\_\_ in

Area \_\_\_\_\_ in<sup>2</sup>




Perimeter \_\_\_\_\_ cm

Area \_\_\_\_\_ cm<sup>2</sup>



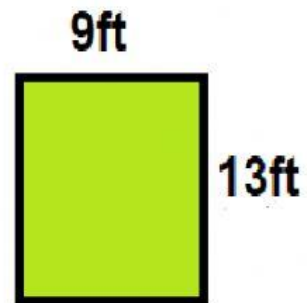
Perimeter \_\_\_\_\_ ft

Area \_\_\_\_\_ ft<sup>2</sup>




Perimeter \_\_\_\_\_ ft

Area \_\_\_\_\_ ft<sup>2</sup>



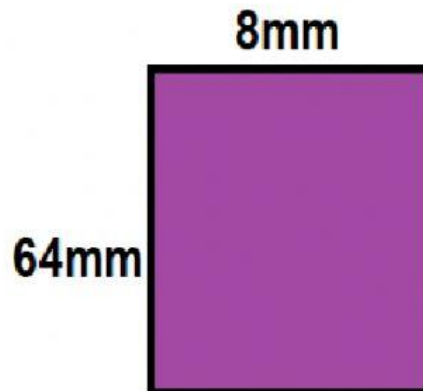
Perimeter \_\_\_\_\_ ft

Area \_\_\_\_\_ ft<sup>2</sup>



Perimeter \_\_\_\_\_ in

Area \_\_\_\_\_ in<sup>2</sup>



Perimeter \_\_\_\_\_ mm

Area \_\_\_\_\_ mm<sup>2</sup>