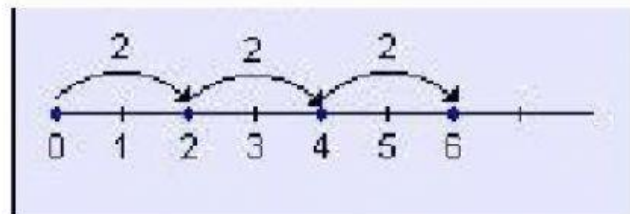
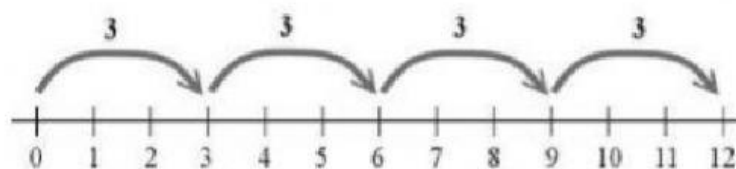


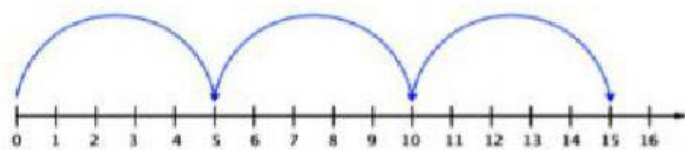
Dividir dando saltos hacia atrás en la recta numérica



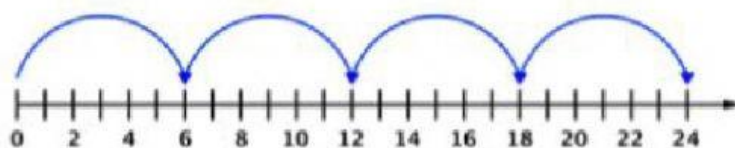
Encuentre el cociente de las divisiones



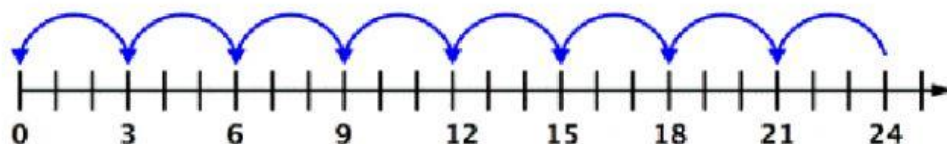
$$12 \div 3 = \underline{\quad}$$



$$15 \div 5 = \underline{\quad}$$



$$24 \div 6 = \underline{\quad}$$



$$24 \div 3 = \underline{\quad}$$