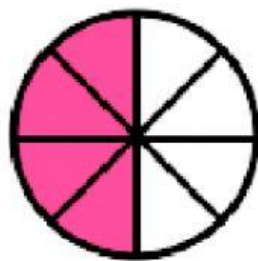


FRACCIONES

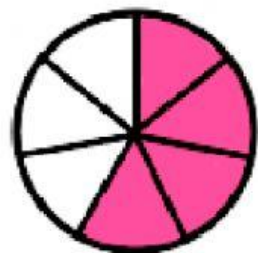
Une cada gráfico con la fracción correspondiente



$$\frac{4}{6}$$



$$\frac{4}{7}$$



$$\frac{5}{7}$$



$$\frac{4}{8}$$



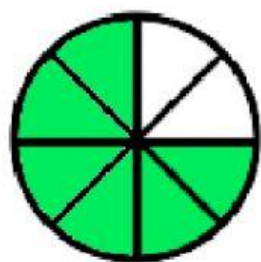
$$\frac{5}{8}$$



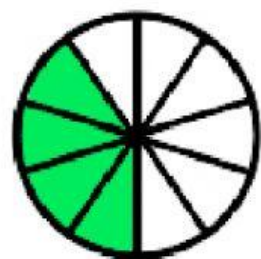
$$\frac{5}{6}$$

FRACCIONES

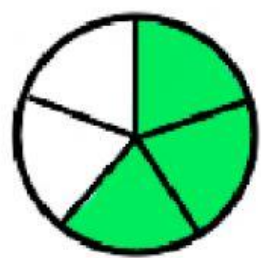
Une cada gráfico con la fracción correspondiente



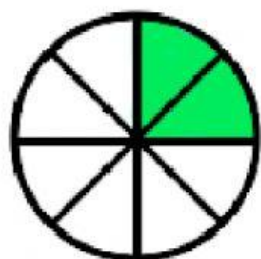
$$\frac{5}{9}$$



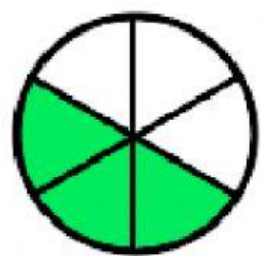
$$\frac{6}{8}$$



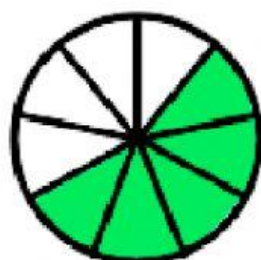
$$\frac{2}{8}$$



$$\frac{3}{5}$$



$$\frac{4}{10}$$



$$\frac{3}{6}$$