




1. How many are left? $6 - 3 = \underline{\hspace{2cm}}$ peppers	
2. Write the sum.	$3 + 6 = \underline{\hspace{2cm}}$
3. Count by 5's.	5, 10, $\underline{\hspace{2cm}}$ , 20, $\underline{\hspace{2cm}}$
4. The <i>minus</i> (-) sign tells you to.	add      subtract
5. Which number is smaller?	26      53
6. Write the time.	 $\underline{\hspace{2cm}}$ o'clock
7. Draw a triangle.	
8. Write another sentence for $4 + 6 = 10$ .	$\underline{\hspace{2cm}} + \underline{\hspace{2cm}} = \underline{\hspace{2cm}}$
9. Which is lighter?	
10. What word tells <i>how many in all</i> ?	sum      subtract