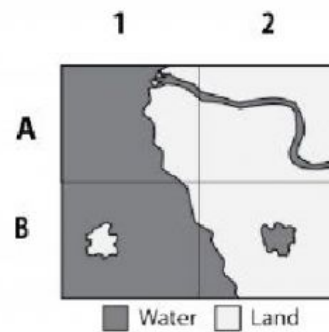


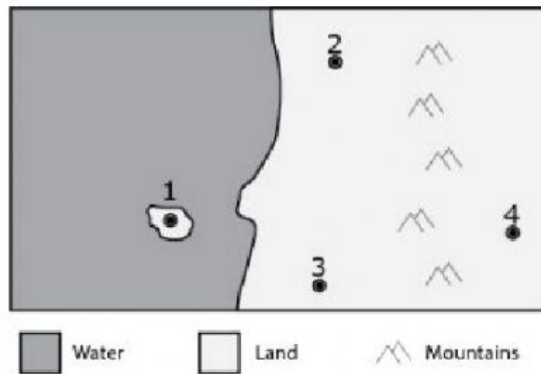
- 1 This map with a simple grid shows land and water.



In which grid location can we find a lake?

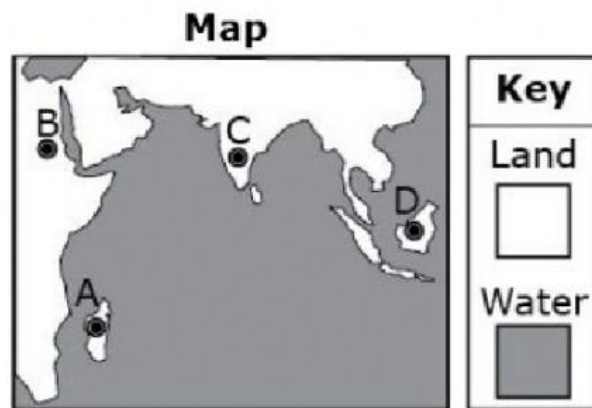
- A A1
- B A2
- C B1
- D B2

- 2 If you wanted to travel on a path that would take you through water, land, and the mountains, your path would be between points–



- A 2 and 3.
- B 3 and 4.
- C 1 and 4.
- D 1 and 2.

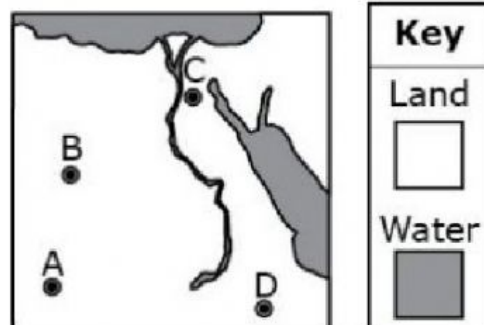
- 3 A peninsula is a piece of land that is surrounded by water on three sides.



Which of the places on the map is on a peninsula?

- A Place A
- B Place B
- C Place C
- D Place D

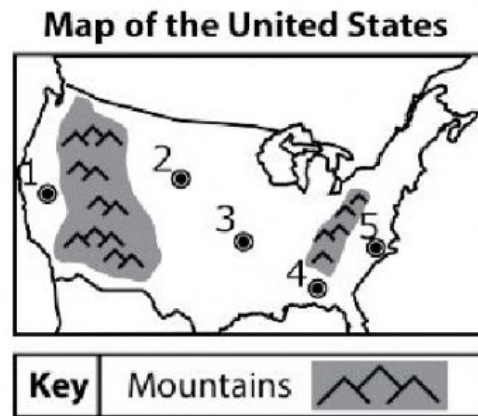
- 4 This map shows four cities: A, B, C, and D.



Which city is closest to water?

- A A
- B B
- C C
- D D

- 5 The map below shows mountains and five cities.



Which two cities are separated by mountains?

- A 1 and 2
- B 2 and 3
- C 3 and 4
- D 4 and 5