



Name: \_\_\_\_\_

Class: 2 \_\_\_\_\_

Subject Mathematics

Place Value, Ascending and Descending Order

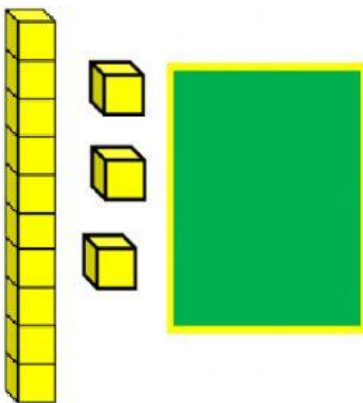
WEEKLY TEST



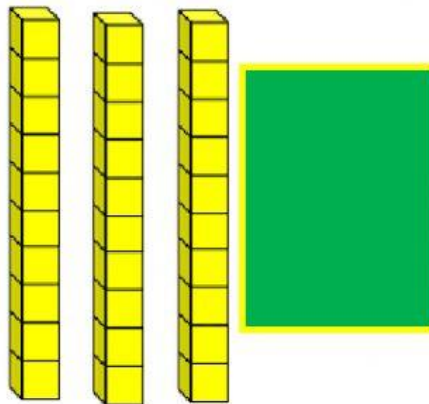
What are the numbers of the blocks given?



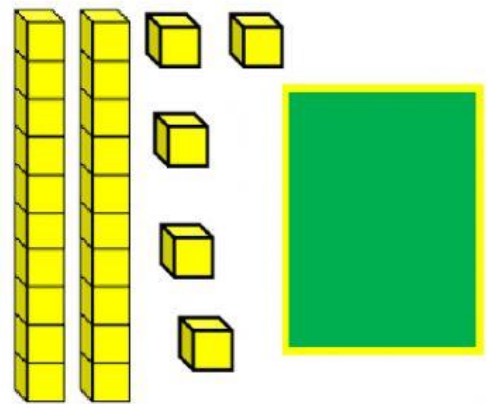
1.



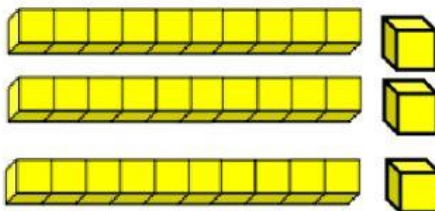
2.



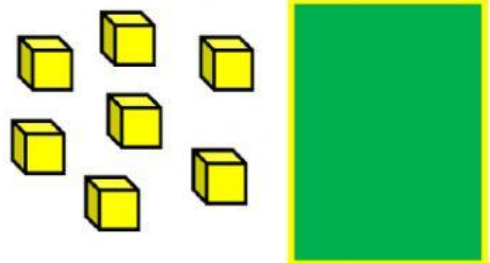
3.



4.



5.



Place these numbers in the correct place.

8

89

45



Tens	Ones

Tens	Ones

Tens	Ones

Place these numbers in ascending order in the box below.



45

13

67

23

5



**32**

**30**

**35**

**37**

**39**

--	--	--	--	--

