








NAME: _____

GROUP: SECOND __ GRADE

DATE: _____

Select if you have to color. After, answer the questions//Selecciona si debes colorearla. Luego responde las preguntas



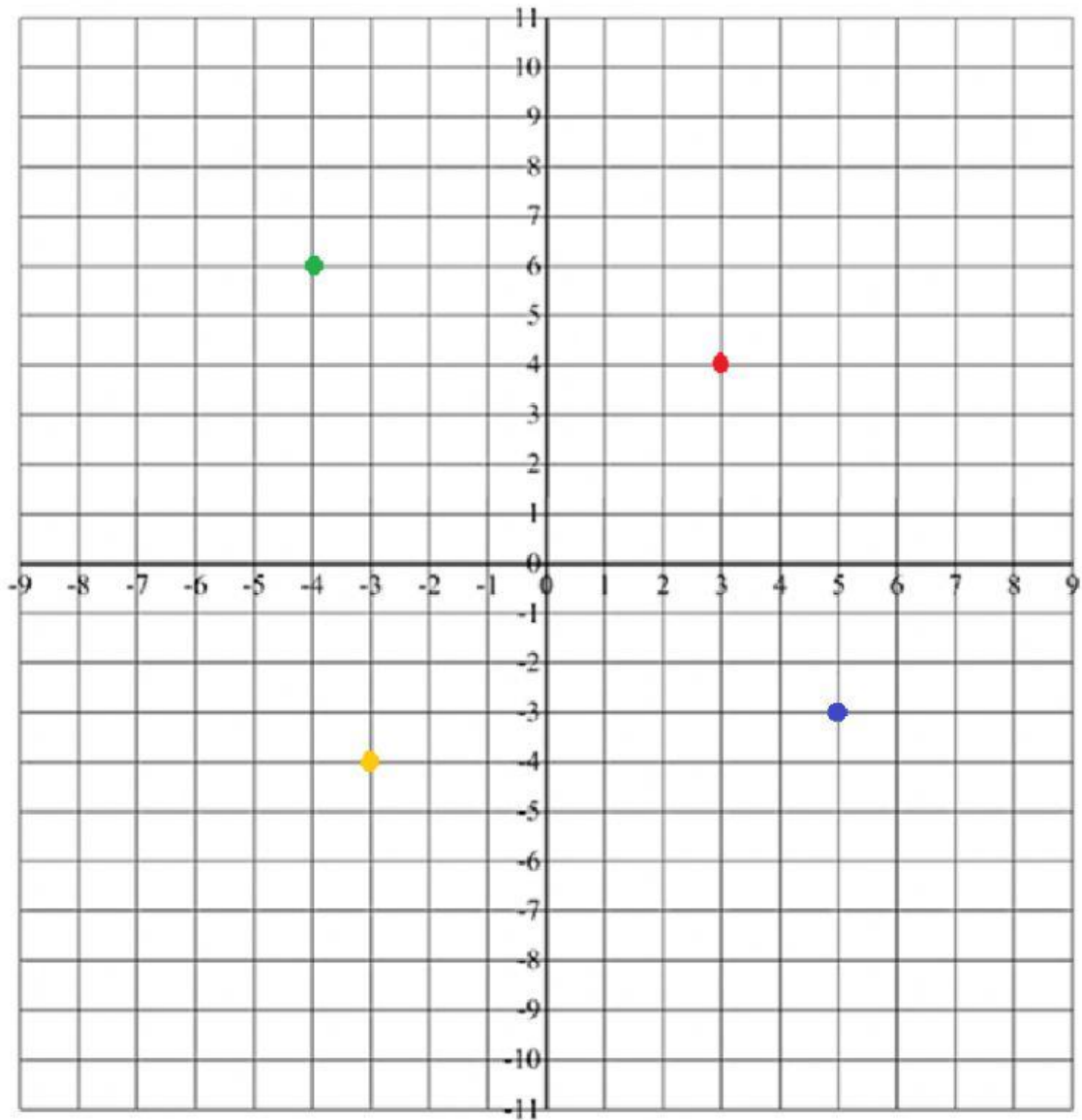
Number of Balls					
6					
5					
4					
3					
2					
1					
0					
	Beach Ball 	Foot Ball 	Soccer Ball 	Base Ball 	Basket Ball 

- a) How many beach balls are there? _____
- b) How many balls are there in all? _____
- c) Do you have more soccer balls or basketballs? _____
- d) Which one has the less quantity? _____



MATH 4th TERM

2) Choose the corresponding color to every coordinate./ Escoge el color correspondiente a cada coordenada



a) $(-3, -4) =$

b) $(3, 4) =$

c) $(-4, 6) =$

d) $(5, -3) =$