



## EVS WORKSHEET 2020-21

Ln: Our Earth

GRADE: 2

### I. Fill in the blanks using the words from the help box:

atmosphere   land   water   22<sup>nd</sup> April   globe   landforms

1. The surface of the Earth is made up of \_\_\_\_\_ and \_\_\_\_\_.
2. Different types of land on earth are called \_\_\_\_\_.
3. The air surrounding the Earth is called \_\_\_\_\_.
4. We celebrate the Earth day on \_\_\_\_\_ every year.
5. The model of the Earth is called a \_\_\_\_\_.



### II. Define the following water bodies:

a) Lake: \_\_\_\_\_  
\_\_\_\_\_



b) River: \_\_\_\_\_  
\_\_\_\_\_



c) Ocean: \_\_\_\_\_  
\_\_\_\_\_

d) Stream: \_\_\_\_\_

**III. Give one word for the following:**

1. Flat land : \_\_\_\_\_
2. The low land between two hills: \_\_\_\_\_
3. Very high hills : \_\_\_\_\_
4. Big seas: \_\_\_\_\_



**IV. Answer the following:**

- a) Why is a plateau also known as tableland?

\_\_\_\_\_

\_\_\_\_\_



- b) Describe the blue planet.

\_\_\_\_\_

\_\_\_\_\_



\_\_\_\_\_



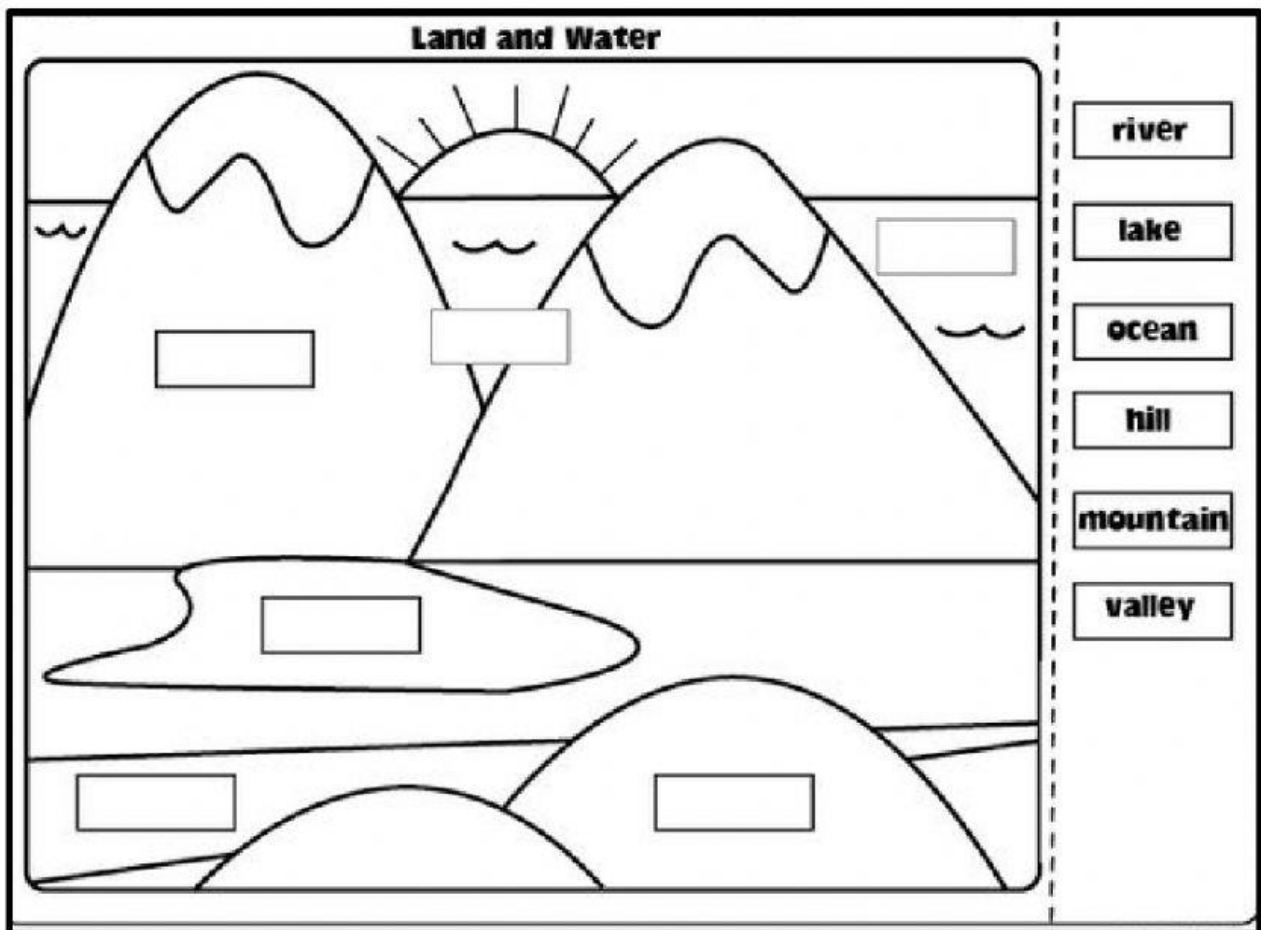
**V. Identify and circle the names of the 5 hidden water bodies in the given grid**

L	I	R	O	P	T	P	L
A	T	I	N	D	O	O	A
K	Y	V	R	I	V	N	K
E	S	E	A	L	N	K	P
S	T	R	E	A	M	A	S
W	O	C	E	A	N	L	N

**VI. Draw any two landforms and name them.**



**VII. Identify the landforms and water bodies and label them in the boxes.**



\*\*\*\*\*

## EVS WORKSHEET (Answer key)

### I. Fill in the blanks using the words from the help box:

atmosphere   land   water   22<sup>nd</sup> April   globe   landforms

1. The surface of the Earth is made up of **land** and **water**.
2. Different types of land on earth are called **landforms**.
3. The air surrounding the Earth is called **atmosphere**.
4. We celebrate the Earth day on **22<sup>nd</sup> April** every year.
5. The model of the Earth is called a **globe**.



### II. Define the following water bodies:

- a) Lake: **When water collects in a large area of land, it forms a lake.**
- b) River: **A river is formed when snow melts on high mountains and comes down to the plains.**
- c) Oceans: **Oceans are big seas. Their water is salty and cannot be used for drinking.**
- d) Stream: **A stream is a small river.**



### III. Give one word for the following:

1. Flat land : **Plain**
2. The low land between two hills: **Valley**
3. Very high hills : **Mountains**



4. Big seas: **Oceans**

**IV. Answer the following:**

a) Why is a plateau also known as tableland?

Ans. A plateau is a highland which is flat at the top and looks like a table top. Therefore, it is also known as a tableland.



b) Describe the blue planet.

Ans. Our earth is also called the blue planet because it has 70% water and it looks blue from space.

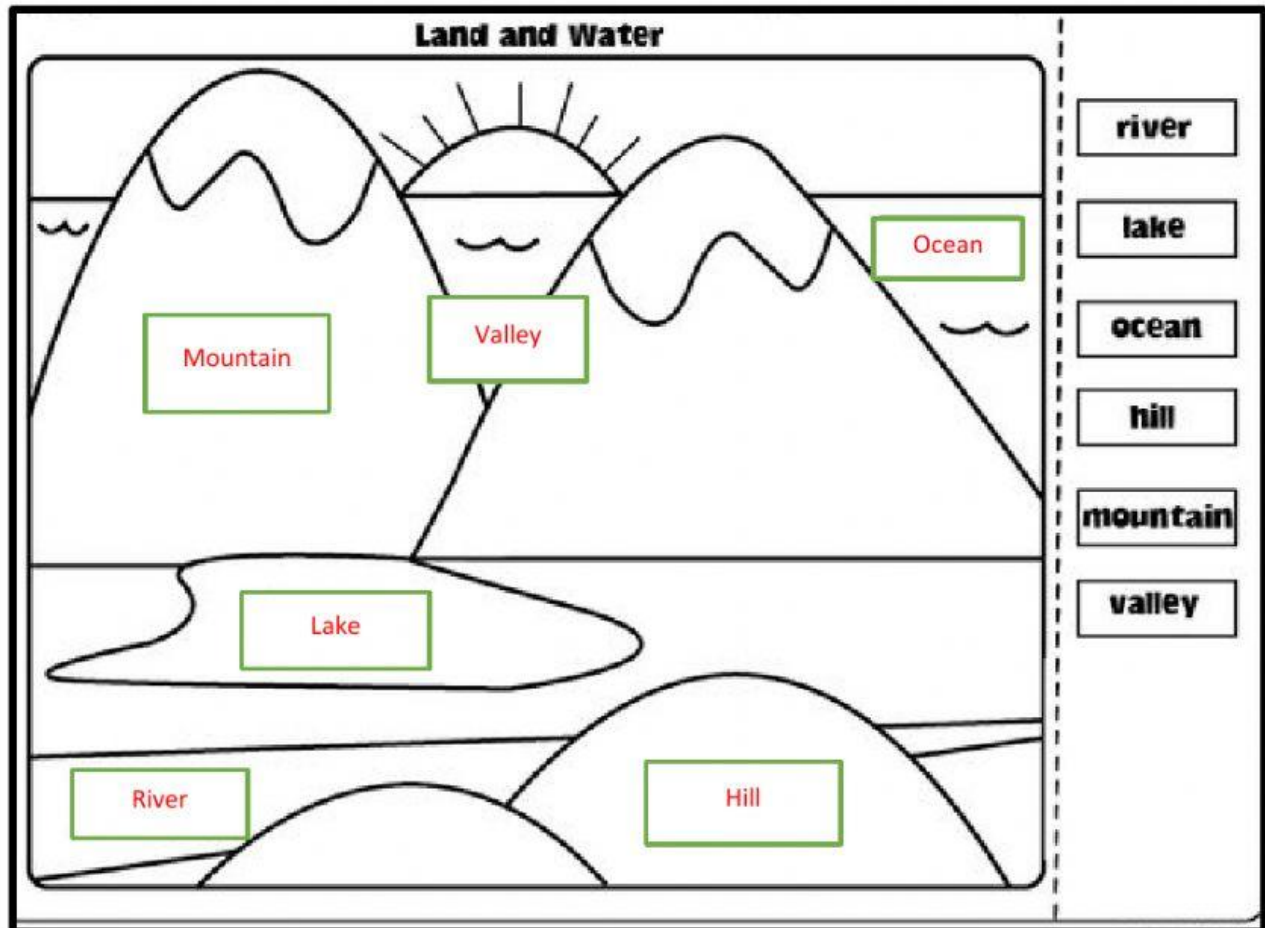


**V. Identify and circle the names of the 5 hidden water bodies in the given grid**

L	I	R	O	P	T	P	L
A	T	I	N	D	O	O	A
K	Y	V	R	I	V	N	K
E	S	E	A	L	N	K	P
S	T	R	E	A	M	A	S
W	O	C	E	A	N	L	N

**VI. Draw any two landforms and name them. (Student's choice)**

VII. Identify the landforms and water bodies and label them in the boxes.



\*\*\*\*\*