




MATH INNOVATORS
2020-2021

Name: _____

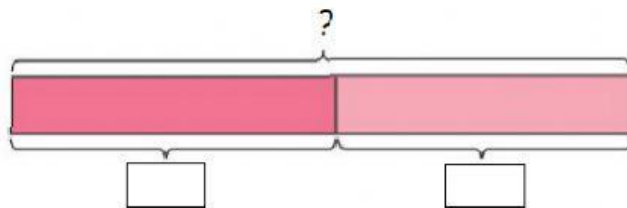
Solve using UPAC.

1. The table below shows the number of seeds contained in a bag.

Carnation: 322	Rose: 242	Sunflower: 329
		

Fill in the bar and find the answer.

2. How many sunflower and rose seeds are there altogether?

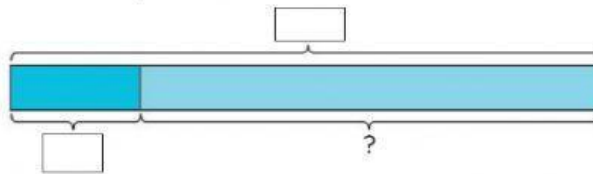


- ☐ 1. Understand
- ☐ 2. Plan
- ☐ 3. Answer
- ☐ 4. Check

H	T	O

There are _____ sunflower and rose seeds altogether.

1. 353 plants were planted in the school garden.
Students of Innovators 1 planted 46.
How many plants did the rest of the Innovators
students plant?



H	T	O

- ☐ 1. Understand
- ☐ 2. Plan
- ☐ 3. Answer
- ☐ 4. Check

The rest of the students planted ____.