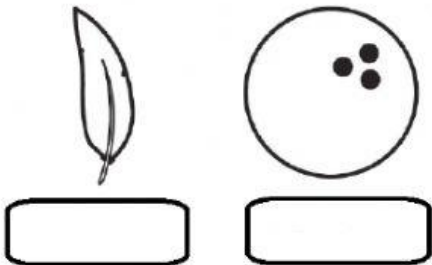



ACTIVITY 1

Write 'heavy' or 'light'.

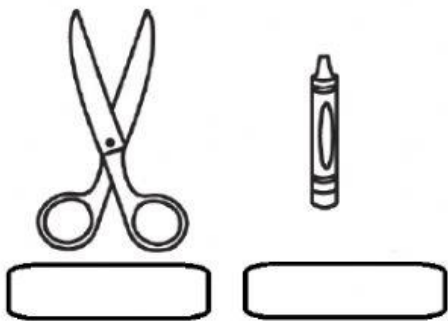
1.



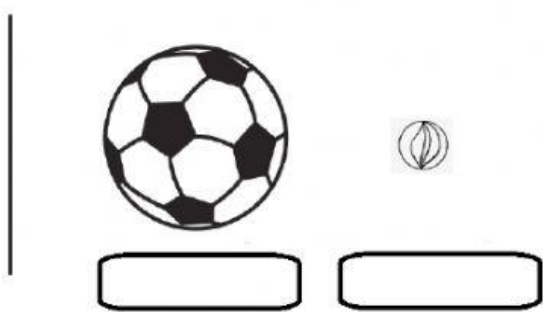
2.




3.




4.



5.




6.



ACTIVITY 2


Choose 'heavier' or 'lighter'. Click on the correct option.

1.



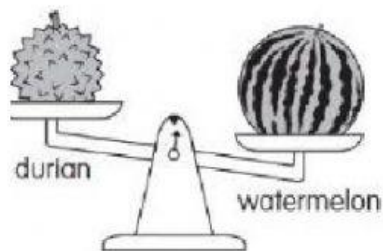
- a) Durian is (heavier , lighter) than pineapple.
- b) Pineapple is (heavier , lighter) than durian.

2.



- a) Pineapple is (heavier , lighter) than watermelon.
- b) Watermelon is (heavier , lighter) than pineapple.

3.

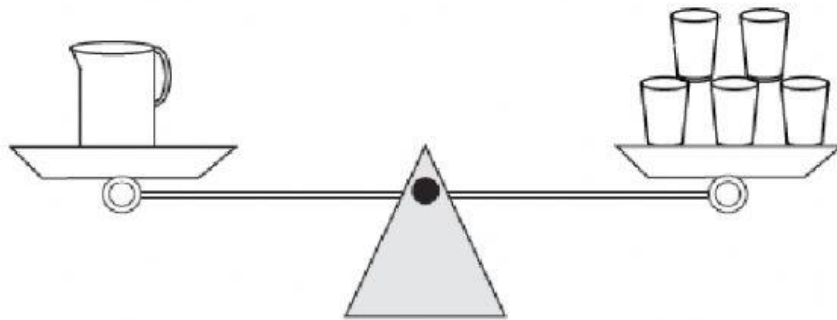


- a) Durian is (heavier , lighter) than watermelon.
- b) Watermelon is (heavier , lighter) than durian.

ACTIVITY 3

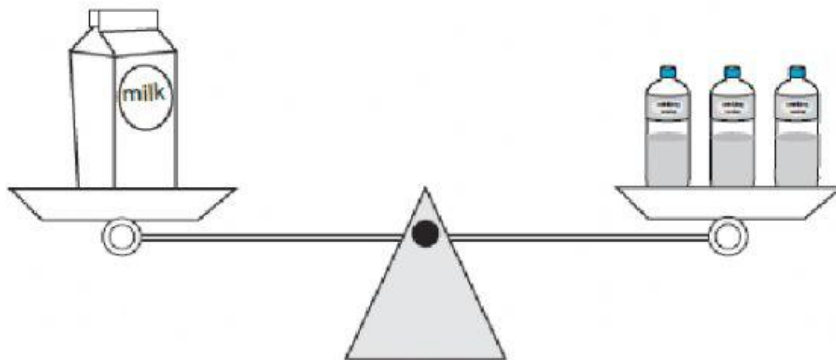
Write the correct number of units.

a.



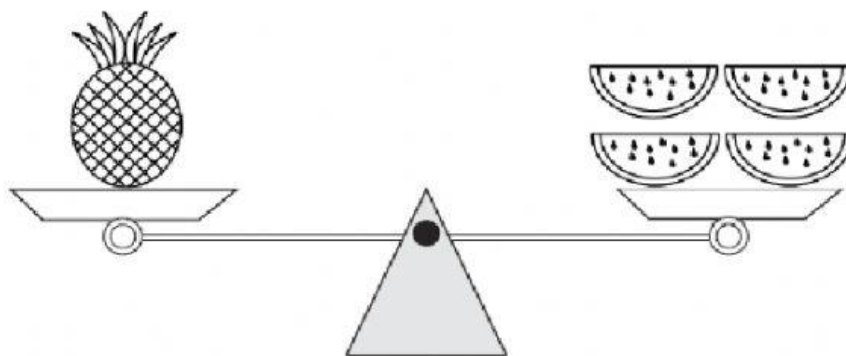
The mass of the jug is equal to _____ glasses.

b.



The mass of the milk is equal to _____ bottles.

c.

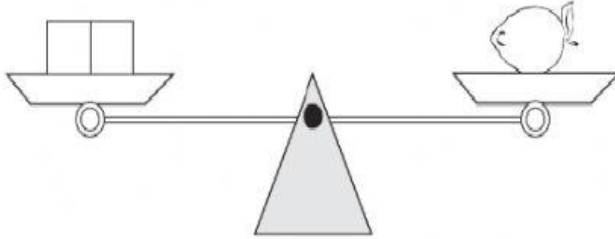


The mass of the pineapple is equal to _____ watermelons.

ACTIVITY 4

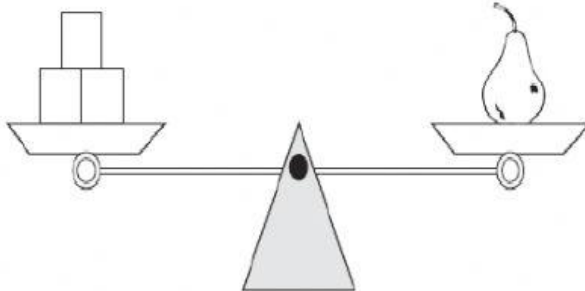
1. Write the correct number of units.

a.



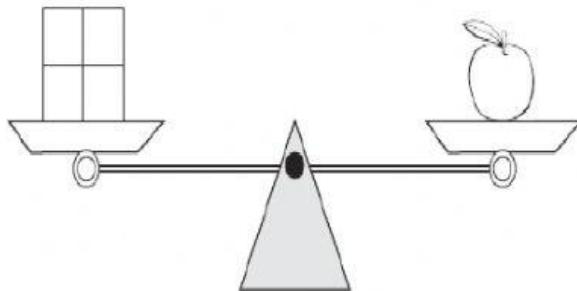
The mass of the lemon is equal to _____ blocks.

b.



The mass of the pear is equal to _____ blocks.

c.



The mass of the apple is equal to _____ blocks.

2. Compare the mass of the objects above. Drag and drop the box to fill in the blanks.



a. The mass of the lemon is _____ than the pear.

b. The mass of the apple is _____ than the pear.

c. The heaviest fruit is the _____.

d. The lightest fruit is the _____.