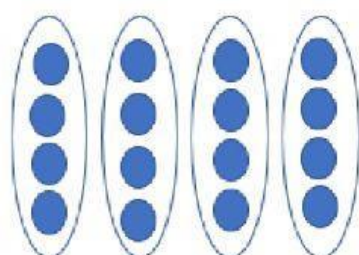



4. 12 counters

2 equal groups

_____ in each group

$$\underline{\hspace{1cm}} \div \underline{\hspace{1cm}} = \underline{\hspace{1cm}}$$

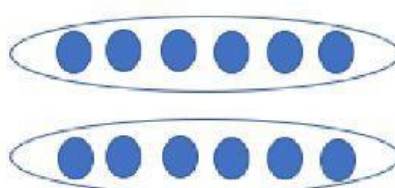


5. 16 counters

4 equal groups

_____ in each group

$$\underline{\hspace{1cm}} \div \underline{\hspace{1cm}} = \underline{\hspace{1cm}}$$



7. 8 counters

_____ equal groups

4 in each group

$$8 \div \underline{\hspace{1cm}} = 4$$

