

Della Montessori Star School
Grade 1
FIRST TERM 2020/2021 ACADEMIC SESSION
Mid Term Test
Numeracy

NAME.....

ATTEMPT ALL QUESTIONS

1. Fill in the gaps with the correct counting numbers

3, _____,	_____,	6, _____,	_____,	9
111, _____,	_____,	114, _____,	116, _____,	
10, _____,	_____,	40, _____,	60, _____,	
_____, 50,	60, _____,	_____, 90	_____, 110	

2. Find $\frac{1}{4}$ of 8 squares = _____

3. Find the double of the following

i. 5 = _____

ii. 4 = _____


iii. 8 = _____

iv. 3 = _____


4. Find the half of the following.

i. 8 = _____


ii. $6 = \underline{\hspace{2cm}}$



iii. $12 = \underline{\hspace{2cm}}$



iv. $18 = \underline{\hspace{2cm}}$



5. Add up the following

i.

H	T	U
3	1	4
+2	5	3

ii.

T	U
4	2
+2	0

iii.

H	T	U
5	2	1
+3	7	6

iv.

T	U
2	6
+2	3
