

Task: From the selection of organs below select the ones you think make up the following organ system.

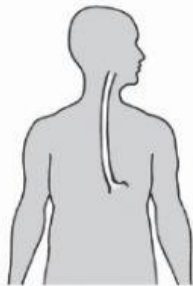
Note: There is an order.

Digestive system

--	--	--



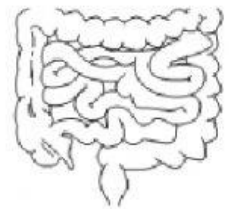
Petal



Gullet



Windpipe



Intestines



Stem




Stomach

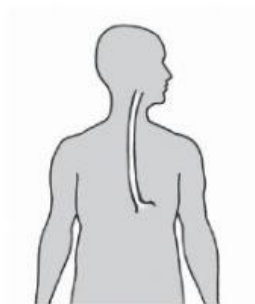
Task: From the selection of organs below select the ones you think make up the following organ system.

Note: There is an order.


Respiratory system



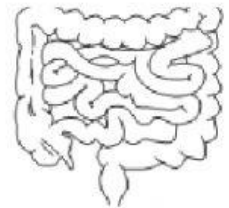
Petal



Gullet



Liver



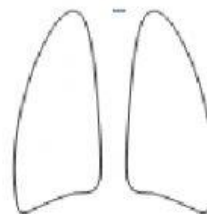
Intestines



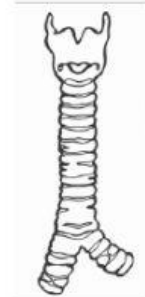
Stem



Stomach



Lungs



Windpipe

Task: From the selection of organs below select the ones you think make up the following organ system.

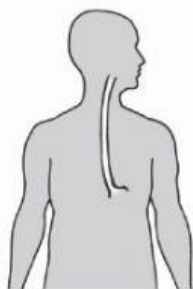
Note: There is an order.

Water Transport system

--	--	--



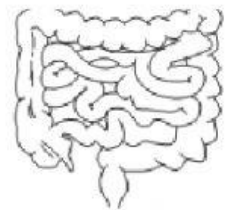
Petal



Gullet



Leaf



Intestines



Stem



Stomach



Roots