

11/2 Math Problem of the Day

1. Count the candy by 2's.



8

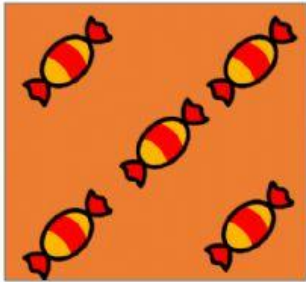


7




10


2. Who collected MORE candy on Halloween?



Dwight



Jim



Kevin

Dwight

Jim

Kevin

3. I collected 20 pieces of candy on Halloween. I ate 10 pieces on Halloween and 5 pieces yesterday. How many pieces of candy do I have left?



15

5

20