

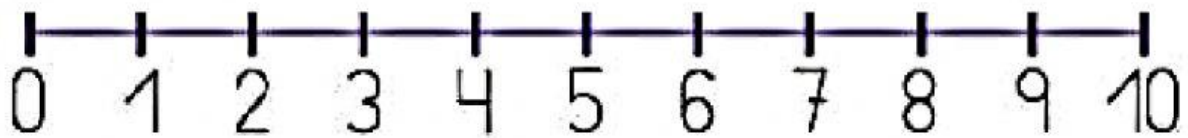
Trabajamos la resta en  
la recta numérica



1.- Resuelvo las operaciones.




$$9 - 5 = \square$$



$$10 - 3 = \square$$

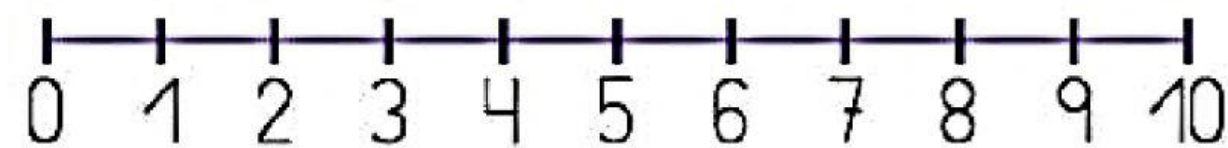




$$6 - 1 = \square$$



$$7 - 4 = \square$$



$$8 - 2 = \square$$

