

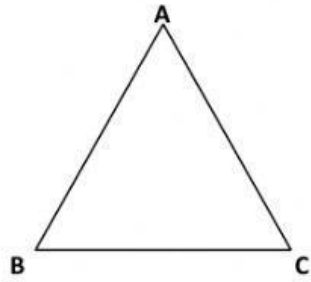
Name of the Student: .....R.No: .....

Name of the School: ..... Mandal: .....

Class: 6<sup>th</sup>                      Subject: MATHEMATICS                      Topic: LINES & ANGLES


---

**Q1. Write the line segments of the given Triangle ABC :**



- 1 .....
- 2 .....
- 3 .....

**Q2. Write the Angles of the given Rectangle ABCD.**

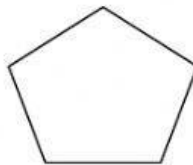


- 1. .... 2 .....
- 3 ..... 4 .....


**3. Name the given polygons: ( SQUARE, TRIANGLE, PENTAGON)**



.....



.....



.....