

















HOLY HEARTS SCHOOL VARANASI

Fill in the blanks

Before	Between	After
 ← 	  	 → 
 ← 	  	 → 
 ← 	  	 → 
 ← 	  	 → 
 ← 	  	 → 
 ← 	  	 → 

Before	Between	After
 ← 	  	 → 
 ← 	  	 → 
 ← 	  	 → 
 ← 	  	 → 
 ← 	  	 → 
 ← 	  	 → 

Before and After



Write the numbers which comes before and after the given numbers.




Increasing Order

Number the things in each set in an increasing order according to their size.



Decreasing Order - Number the trees in decreasing order
(Biggest to Smallest)



Odd One Out



Circle the odd one out in each of the given sets of pictures.



MATHSDIARY.com