



O S D A V Public School, Kaithal

Class –I

Subject: Mathematics


Date:

Name :

Section :

Roll No.


Q1. Match the shapes with the name.



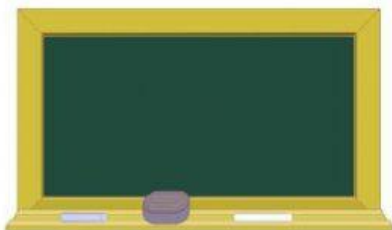
Triangle



Rectangle




Circle



Square

Q2. Write down side and corners.




Side :

Corner:




Side

Corner:



Side:

Corner:



Side:

Corner:

Teacher's Remarks: