

fewer than

## Comparing Groups of Numbers

### Activity 2

more than

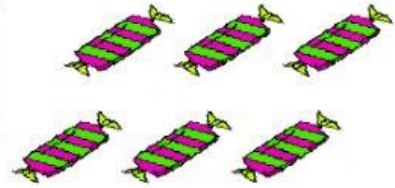
Name: \_\_\_\_\_

1. Complete the number sentence and say which is **more** than or **fewer** than, example:

$$6 - 3 = 3$$

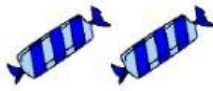


3 is fewer than 6




2.

$$8 - 2 = 6$$



2 is \_\_\_\_ than 8



3.

$$8 - 4 = 4$$



8 is \_\_\_\_ than 4



4.

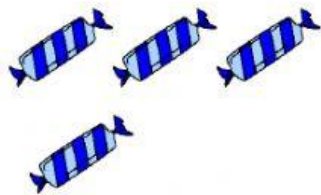


$$10 - 5 = 5$$

10 is \_\_\_\_ than 5

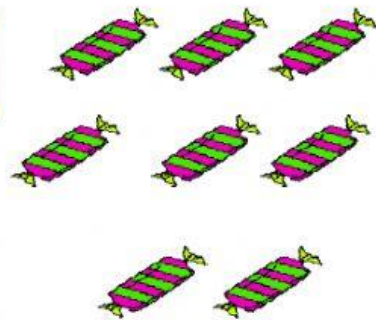


5.



$$8 - 4 = 4$$

4 is \_\_\_\_ than 8



6.



$$9 - 3 = 6$$

3 is \_\_\_\_ than 9

