

Math Homework


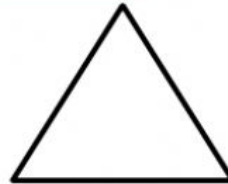



Name :

Group :

Date :

1. Write the name of these shapes :



2. Choose :


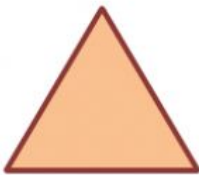
* A square has _____ Sides .

* A rectangle has _____ Corners .

* A triangle has _____ vertices . -

* How many vertices does a circle have ? _____ -

3. Match.



Rectangle

Triangle

Circle

Teacher : Shrooq Alzoubi