







Name: _____

Find the next dollar up for each item.

| | | |
|--|--|--|
|  <p>\$3.45</p> <p>Next dollar up</p> <p>_____</p> |  <p>\$1.28</p> <p>Next dollar up</p> <p>_____</p> |  <p>\$2.30</p> <p>Next dollar up</p> <p>_____</p> |
|  <p>\$6.50</p> <p>Next dollar up</p> <p>_____</p> |  <p>\$4.29</p> <p>Next dollar up</p> <p>_____</p> |  <p>\$1.89</p> <p>Next dollar up</p> <p>_____</p> |