

5. ఎంత ఎక్కువ - ఎంత తక్కువ?

How much more - How much less?

Name -

Class:- IV

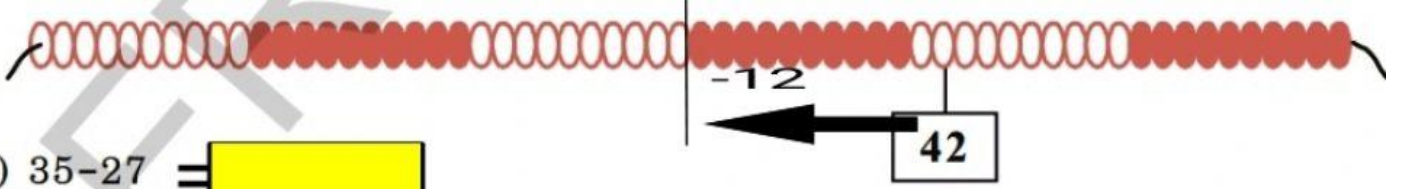
Subject:- Maths

Solve the following on the beads chain in whichever you want and state the difference and write.

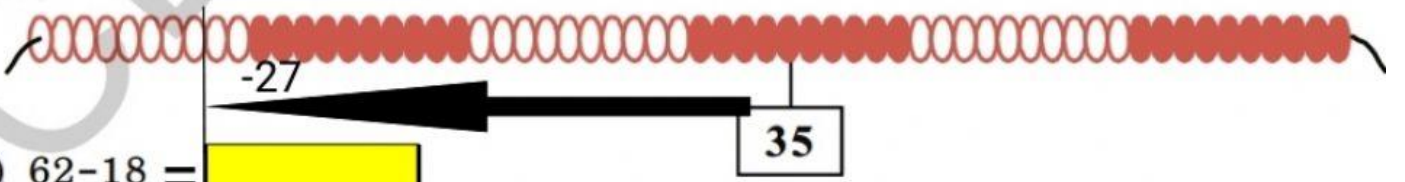
మీరు కూడా పూసలదండను ఉపయోగించి తీసివేతలను మీ ఇష్టమైన పద్ధతిలో చేయండి.

ప్రతి రంగులో 10 పూసలు ఉంటాయి.


(అ) $42 - 12 =$



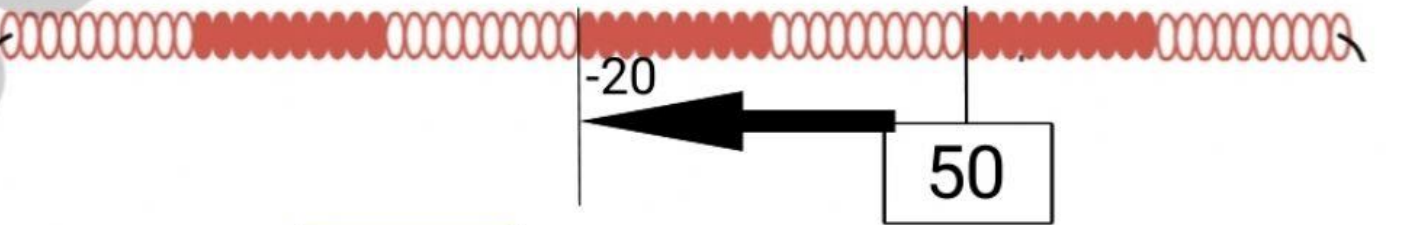
(ఆ) $35 - 27 =$



(ఇ) $62 - 18 =$



(ఈ) $50 - 20 =$



(ఉ) $53 - 12 =$

