

Padankan jawapan yang betul

1.



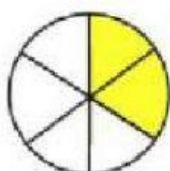
$$\frac{2}{10}$$

2.



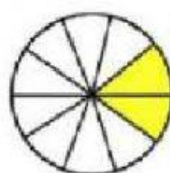
$$\frac{4}{12}$$

3.



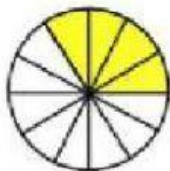
$$\frac{4}{8}$$

4.




$$\frac{2}{3}$$

5.



$$\frac{3}{4}$$

6.



$$\frac{2}{6}$$