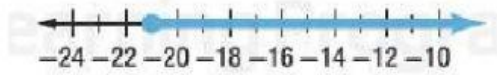
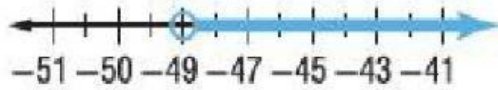




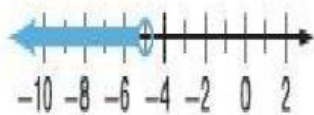
صل المتباينة بالتمثيل المناسب



$$-\frac{3}{7}r < 21$$



$$-7d \leq 147$$



$$11y - 13 > 42$$