

1. Match the time.

- | | |
|--------------------------------|----------|
| 1. It's three o'clock. | a. 12.35 |
| 2. It's a quarter past eight. | b. 8.05 |
| 3. It's ten thirty. | c. 11.25 |
| 4. It's five to five. | d. 1.58 |
| 5. It's nine twenty five. | e. 8.15 |
| 6. It's twenty-five to eleven. | f. 4.55 |
| 7. It's two to two. | g. 10.35 |
| 8. It's eleven twenty-five. | h. 9.25 |
| 9. It's five past eight. | i. 10.30 |
| 10. It's twelve thirty-five. | j. 3.00 |

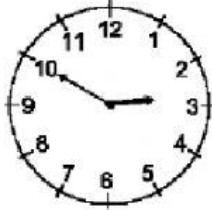
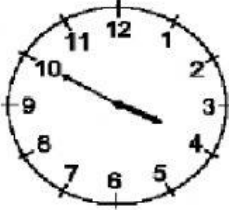



2. What time is it? Write in numbers .

1. It's seven thirty: _____
2. It's five to ten: _____
3. It's one to one : _____
4. It's a quarter past three : _____
5. It's eight forty-five: _____
6. It's ten past eleven: _____
7. It's a quarter to three: _____
8. It's four thirty-five: _____
9. It's twelve o'clock: _____

10. It's two fifty-five: _____

3) Look at the clocks and write the time.

		
It's <u>ten to three.</u>	It's _____	It's _____
