








Count the coins and write the correct letter (a, b or c)

1.		a. \$2.16 b. \$1.31 c. \$1.16 Answer: ____
2.		a. \$2.45 b. \$1.25 c. \$2.27 Answer: ____
3.		a. \$4.02 b. \$4.20 c. \$2.10 Answer: ____
4.		a. \$.53 b. \$53 c. \$3.50 Answer: ____
5.		a. \$4.00 b. \$6.00 c. \$8.00 Answer: ____
6.		a. \$1.05 b. \$1.5 c. \$.75 Answer: ____
7.		a. \$2.00 b. \$1.50 c. \$6.00 Answer: ____

8.



- a. \$5.00
- b. \$1.00
- c. \$10.00

Answer: ____

9.



- a. \$2.03
- b. \$2.3
- c. \$4.03

Answer: ____

10.



- a. \$5.00
- b. \$.25
- c. \$25

Answer: ____