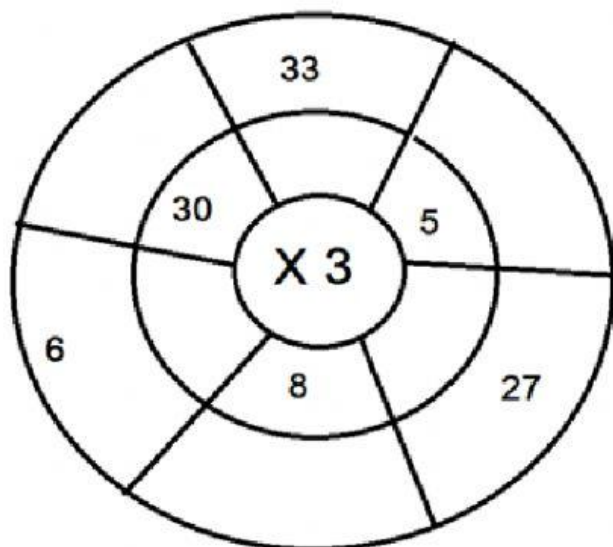
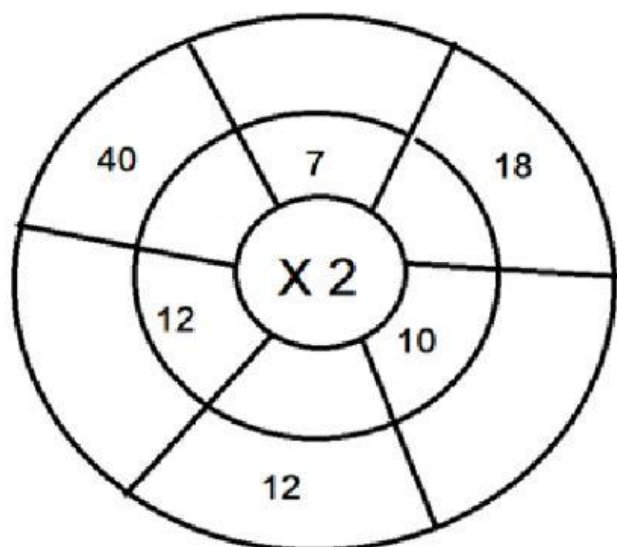


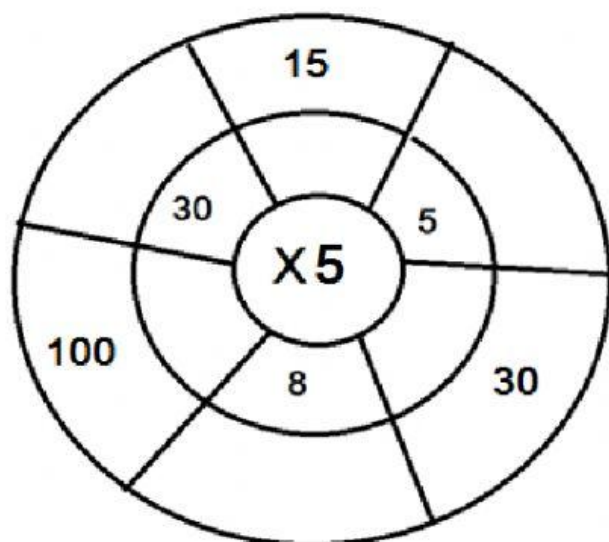
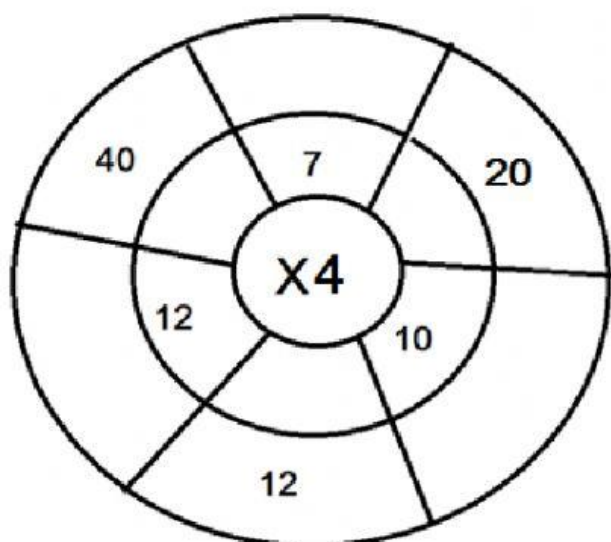
Resuelve las siguientes ruletas y operaciones.



$$\begin{array}{r} 5 \ 3 \ 4 \\ \times 2 \\ \hline \end{array}$$

$$\begin{array}{r} 6 \ 4 \ 3 \\ \times 3 \\ \hline \end{array}$$

$$\begin{array}{r} 2 \ 0 \ 8 \\ \times 3 \\ \hline \end{array}$$



$$\begin{array}{r} 5 \ 3 \ 4 \\ \times 3 \\ \hline \end{array}$$

$$\begin{array}{r} 6 \ 4 \ 3 \\ \times 4 \\ \hline \end{array}$$

$$\begin{array}{r} 2 \ 0 \ 8 \\ \times 5 \\ \hline \end{array}$$