




Name _____

Hundreds, Tens, and Ones

Directions: Write each number of hundreds, tens, and ones.



Place the above numbers in order from least to greatest.

5. _____, _____, _____, _____

Use the digits 2, 3, and 8 to make six different three-digit numbers.

6. _____

9. _____

7. _____

10. _____

8. _____

11. _____

12. Then, write the numbers from problems 6–11 in order from least to greatest.

_____, _____, _____, _____, _____, _____