




Find the value each set of blocks represents.


Answers




1. \_\_\_\_\_




2. \_\_\_\_\_



3. \_\_\_\_\_




4. \_\_\_\_\_




5. \_\_\_\_\_



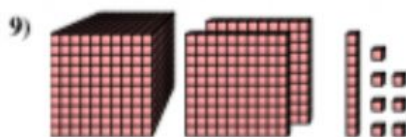
6. \_\_\_\_\_




7. \_\_\_\_\_



8. \_\_\_\_\_



9. \_\_\_\_\_



10. \_\_\_\_\_