

# TELLING THE TIME

ONE Look and write the time under the clock.




It's .....



It's .....




It's .....



It's .....



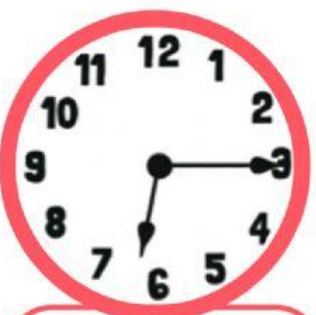
It's .....




It's .....



It's .....



It's .....



It's .....